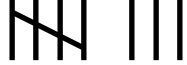





Name: _____

2.MD.10 Draw a picture graph and a bar graph to represent data.....

→ Use the data from the tally chart to complete the graph.

Dog	
Cat	
Hamster	
Fish	

Favorite Pet Graph

N u m b e r	9				
	8				
	7				
	6				
	5				
	4				
	3				
	2				
	1				
			Dog	Cat	Hamster
		Pet			

Name: _____

2.MD.10 Draw a picture graph and a bar graph to represent data.....

→ Use the graph to answer the following questions.

1. Which pet received the most number of votes?

2. Which pet received the least number of votes?

3. Did any pets get the same number of votes? If so, which ones?

4. How many people voted for a dog? _____

5. How many people voted for a fish? _____

6. How many people voted altogether? _____

7. How many more votes did _____ receive than

_____ ? _____

Name: _____

2.MD.10 Draw a picture graph and a bar graph to represent data.....

→ Use the data from the tally chart to complete the graph.

Dog	
Cat	
Hamster	
Fish	

Favorite Pet

N u m b e r	9				
	8				
	7				
	6				
	5				
	4				
	3				
	2				
	1				
			Dog	Cat	Hamster

Pet