


Name: \_\_\_\_\_

# Shapes

~~Go~~ Directions: Draw the shapes described below.


1. Draw a shape with four equal faces.



What is the name of the shape you drew?

\_\_\_\_\_

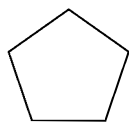
2. Draw a shape with three angles.



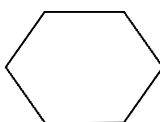
What is the name of the shape you drew?

\_\_\_\_\_

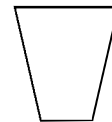
3. Write the names of the shapes on the lines below.



\_\_\_\_\_



\_\_\_\_\_



\_\_\_\_\_