

Name: _____

Partition Shapes


6 Directions: Partition the shapes below as instructed. Number the partitions.

1. Partition the rectangle into two equal shares.



_____ halves

2. Partition the circle into two equal shares.



_____ halves

3. Partition the rectangle into three equal shares.




_____ thirds

Name: _____

Partition Shapes

~~6~~ Directions: Partition the shapes below as instructed. Number the partitions.

4. Partition the circle into three equal shares.




_____ thirds

5. Partition the rectangle into four equal shares.



_____ fourths

6. Partition the circle into four equal shares.



_____ fourths