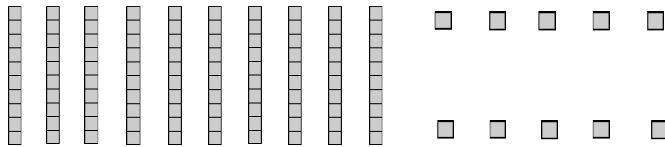



Name: \_\_\_\_\_

# Place Value Blocks

**6** Directions: Circle the place value blocks needed to make the number.

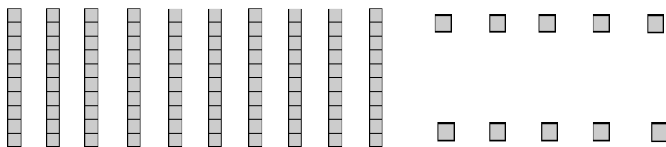

1. 590



How many hundred blocks did you circle? \_\_\_\_\_ Tens? \_\_\_\_\_ Ones? \_\_\_\_\_

Write the number shown by the blocks you circled. \_\_\_\_\_

2. 604



How many hundred blocks did you circle? \_\_\_\_\_ Tens? \_\_\_\_\_ Ones? \_\_\_\_\_

Write the number shown by the blocks you circled. \_\_\_\_\_

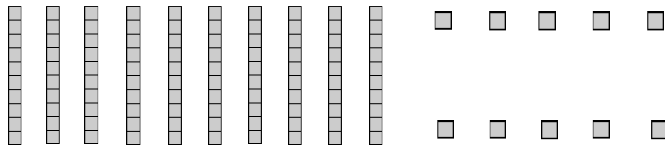

\_\_\_\_ I double checked my work.

Name: \_\_\_\_\_

# Place Value Blocks

**6** Directions: Circle the place value blocks needed to make the number.

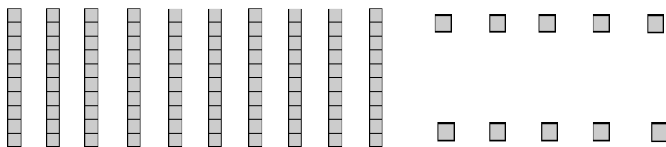

3. 642



How many hundred blocks did you circle? \_\_\_\_\_ Tens? \_\_\_\_\_ Ones? \_\_\_\_\_

Write the number shown by the blocks you circled. \_\_\_\_\_

4. 241



How many hundred blocks did you circle? \_\_\_\_\_ Tens? \_\_\_\_\_ Ones? \_\_\_\_\_

Write the number shown by the blocks you circled. \_\_\_\_\_

\_\_\_\_ I double checked my work.