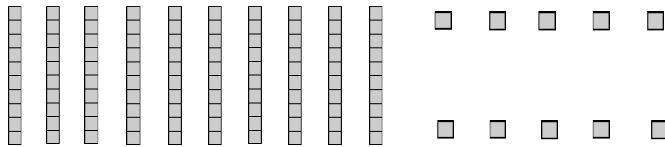



Name: \_\_\_\_\_

# Place Value Blocks

**6** Directions: Circle the place value blocks needed to make the number.

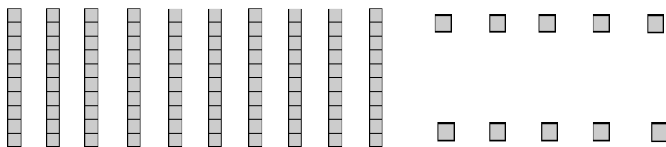

1. 652



How many hundred blocks did you circle? \_\_\_\_\_ Tens? \_\_\_\_\_ Ones? \_\_\_\_\_

Write the number shown by the blocks you circled. \_\_\_\_\_

2. 215



How many hundred blocks did you circle? \_\_\_\_\_ Tens? \_\_\_\_\_ Ones? \_\_\_\_\_

Write the number shown by the blocks you circled. \_\_\_\_\_

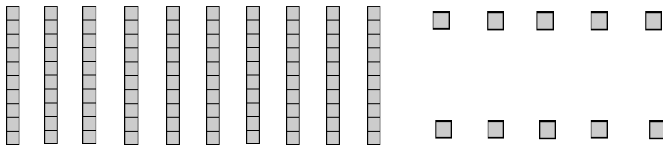

\_\_\_\_ I double checked my work.

Name: \_\_\_\_\_

# Place Value Blocks

**6** Directions: Circle the place value blocks needed to make the number.

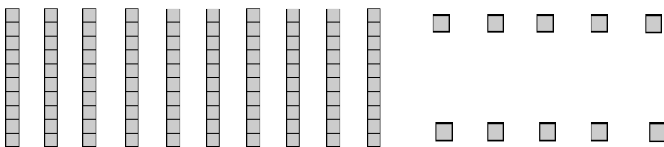

3. 645



How many hundred blocks did you circle? \_\_\_\_\_ Tens? \_\_\_\_\_ Ones? \_\_\_\_\_

Write the number shown by the blocks you circled. \_\_\_\_\_

4. 309



How many hundred blocks did you circle? \_\_\_\_\_ Tens? \_\_\_\_\_ Ones? \_\_\_\_\_

Write the number shown by the blocks you circled. \_\_\_\_\_

\_\_\_\_ I double checked my work.