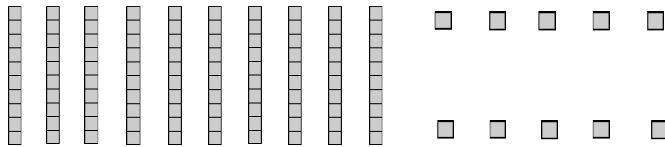



Name: _____

Place Value Blocks

6 Directions: Circle the place value blocks needed to make the number.

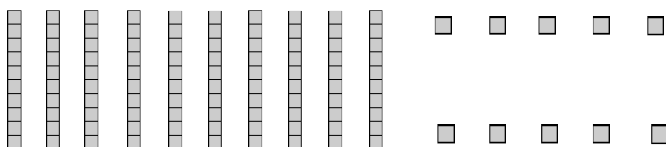

1. 270



How many hundred blocks did you circle? _____ Tens? _____ Ones? _____

Write the number shown by the blocks you circled. _____

2. 594



How many hundred blocks did you circle? _____ Tens? _____ Ones? _____

Write the number shown by the blocks you circled. _____

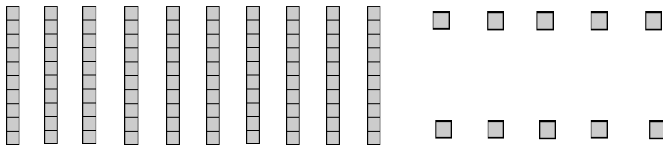

____ I double checked my work.

Name: _____

Place Value Blocks

6 Directions: Circle the place value blocks needed to make the number.

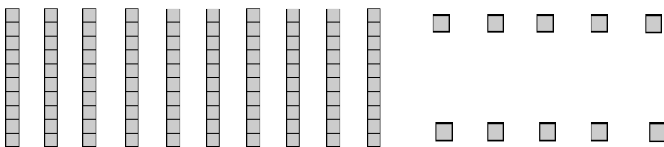

3. 198



How many hundred blocks did you circle? _____ Tens? _____ Ones? _____

Write the number shown by the blocks you circled. _____

4. 989



How many hundred blocks did you circle? _____ Tens? _____ Ones? _____

Write the number shown by the blocks you circled. _____

____ I double checked my work.