

Name: _____


CCSS 2.OA.4 Use addition to find the total number of objects arranged in rectangular arrays with up to 5 rows and up to 5 columns...

Repeated Addition Arrays

6 Directions: Write an equation to solve the problems.

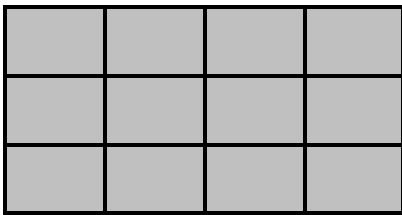
Use repeated addition to write an equation to show how many shaded boxes are shown by the arrays.

Example:




$$\underline{3 + 3 + 3 = 9}$$

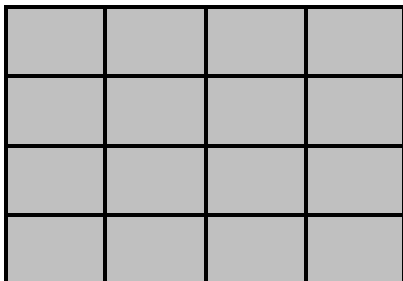
1.



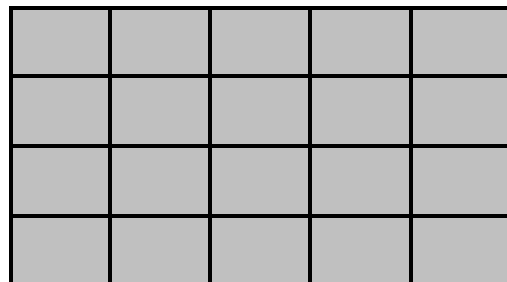
2.



3.



4.



____ I double checked my work.

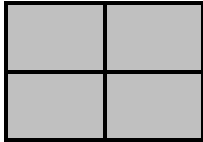
Name: _____

CCSS 2.OA.4 Use addition to find the total number of objects arranged in rectangular arrays with up to 5 rows and up to 5 columns...


Repeated Addition Arrays

~~6~~ Directions: Write an equation to solve the problems.

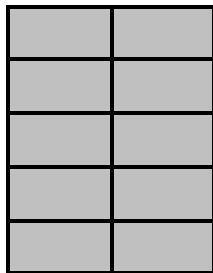
5.




6.



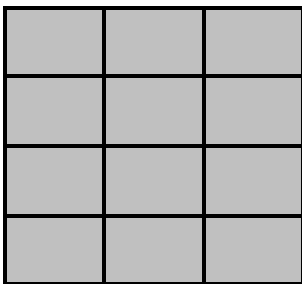
7.



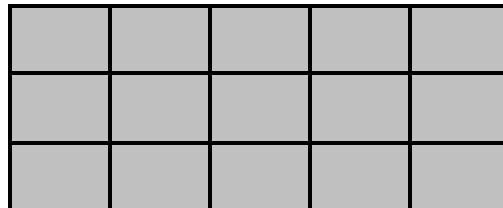
8.



9.



10.



____ I double checked my work.