

Name: _____

Week 1 Day 1

Add

$5 + 5 = \underline{\quad}$

$7 + 7 = \underline{\quad}$

$8 + 8 = \underline{\quad}$

$6 + 6 = \underline{\quad}$

$9 + 9 = \underline{\quad}$

$4 + 4 = \underline{\quad}$

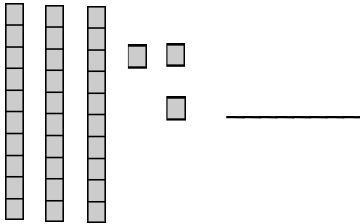
Write the missing number.

31, , 33

15, 16,

47, , 49

Write the number.

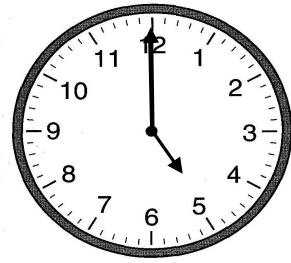


Write <, >, or =

54 58

36 76

Write the time.



:

Subtract

$6 - 3 = \underline{\quad}$

$8 - 4 = \underline{\quad}$

$4 - 2 = \underline{\quad}$

$10 - 5 = \underline{\quad}$

$12 - 6 = \underline{\quad}$

$14 - 7 = \underline{\quad}$

Write the missing number.

Week 1 Day 2

54, , 56

29, 30,

49, , 51

Write the number.

8 tens


5 ones

Write <, >, or =

69 73

42 16

Write the time.



:

Name: _____

Week 1 Day 3

Add

$6 + 6 = \underline{\quad}$

$4 + 4 = \underline{\quad}$

$7 + 7 = \underline{\quad}$

$9 + 9 = \underline{\quad}$

$8 + 8 = \underline{\quad}$

$3 + 3 = \underline{\quad}$

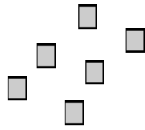
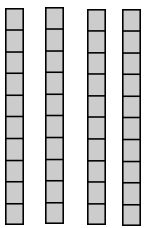
Write the missing number.

89, , 91

78, 79,

 , 55, 56

Write the number.




Write <, >, or =

87 78

15 49

Write the time.



:

Subtract

$18 - 9 = \underline{\quad}$

$16 - 8 = \underline{\quad}$

$6 - 3 = \underline{\quad}$

$10 - 5 = \underline{\quad}$

$12 - 6 = \underline{\quad}$

$14 - 7 = \underline{\quad}$

Write the missing number.

Week 1 Day 4

55, , 57

83, 84,

 , 28, 29

Write the number.

7 tens


3 ones

Write <, >, or =

46 48

87 89

Write the time.



:

Name: _____

Week 1 Day 5

Add

$8 + 8 = \underline{\quad}$

$5 + 5 = \underline{\quad}$

$9 + 9 = \underline{\quad}$

$6 + 6 = \underline{\quad}$

$4 + 4 = \underline{\quad}$

$2 + 2 = \underline{\quad}$

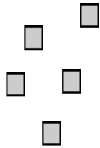
Write the missing number.

39, , 41

50, 51,

 , 87, 88

Write the number.




Write <, >, or =

56 57

68 48

Write the time.

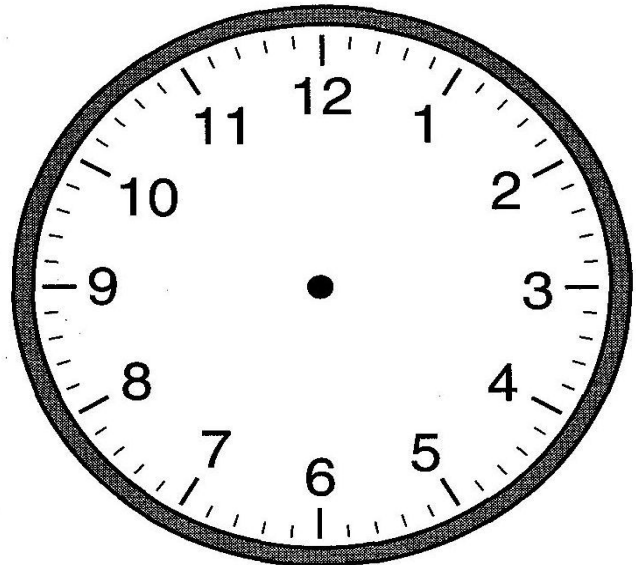


:

Week 1 WP

Braxton's soccer game started at 6:00.

The game lasted **one hour**. What time did Braxton's game end? Draw the hands on the clock and write the digital time to show what time Braxton's game ended.



: