

Name: _____

Week 10 Day 1

Complete the number sentence.

$$\begin{array}{r} 34 \\ 24 \\ + 48 \\ \hline \end{array} \qquad \begin{array}{r} 57 \\ 43 \\ + 18 \\ \hline \end{array}$$

Is 16 even or odd? Draw pairs above and below the line.

What is 10 less than?

678 _____

332 _____

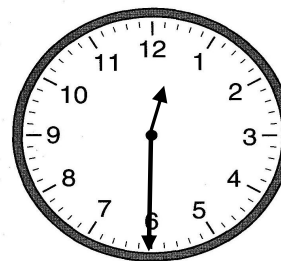
846 _____

Write a fact family using.....

6 9 15

$$\begin{array}{l} _ + _ = _ \\ _ + _ = _ \\ _ - _ = _ \\ _ - _ = _ \end{array}$$

Write the time.



_____ : _____

Subtract.

$$\begin{array}{r} 58 \\ - 25 \\ \hline \end{array} \qquad \begin{array}{r} 87 \\ - 46 \\ \hline \end{array}$$

Week 10 Day 2

Skip count by 100 starting with 378.

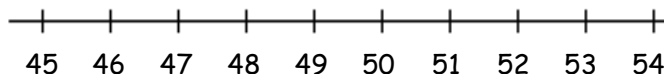
378, _____, _____, _____, _____

Write >, <, or = to compare the numbers.

$500 + 30 + 6$ _____ $200 + 40 + 8$

$400 + 70 + 3$ _____ $900 + 4$

Use the number line to solve.



$53 - 4 = =$ _____

Name: _____

Week 10 Day 3

Complete the number sentence.

$8 + \underline{\quad} = 14$

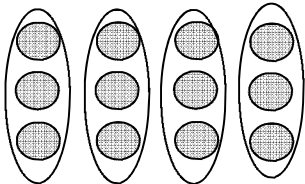
$8 + ? = 14$

$? = \underline{\quad}$

How much money?



use repeated addition to show how many circles there are.



$\underline{\quad} + \underline{\quad} + \underline{\quad} + \underline{\quad} = \underline{\quad}$

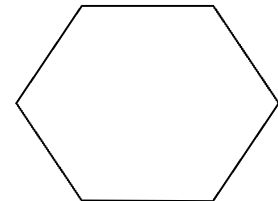
Circle the group of numbers that are from least to greatest.

a) 445, 446, 348, 548

b) 446, 445, 548, 348

c) 348, 445, 446, 548

How many sides and vertices?



_____ sides _____ vertices

Complete the number sentence.

$9 + \underline{\quad} = 17$

$9 + Z = 14$

$Z = \underline{\quad}$

Week 10 Day 4

What is 10 more than.....?

36 _____

264 _____

29 _____

What is 100 less than.....?

654 _____

836 _____

325 _____

Partition (divide) the shape into 4 equal parts.



Write the number in expanded form.

79

Draw a shape with 5 sides.

Name: _____

Week 10 Day 5

Complete the number sentence.

$$\begin{array}{r} 61 \\ 46 \\ +49 \\ \hline \end{array} \qquad \begin{array}{r} 22 \\ 35 \\ + 51 \\ \hline \end{array}$$

Write the number.

7 tens, 3 hundreds, 4 ones

Write the value of the underlined digit.

876 _____

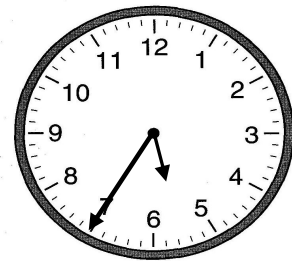
876 _____

876 _____

Write the number in word form.

949

Write the time.



Chloe has some change in her pocket. She wants to buy a bag of popcorn that costs 99 cents. How much more money does Chloe need to buy the popcorn? Show your work.

Week 10 WP