

Name: _____

Week 11 Day 1

Complete the number sentence.

$$\begin{array}{r} 23 \\ 38 \\ + 22 \\ \hline \end{array} \qquad \begin{array}{r} 12 \\ 35 \\ + 17 \\ \hline \end{array}$$

Is 11 even or odd? Draw pairs above and below the line.

What is 10 less than?

459 _____

349 _____


875 _____

Write a fact family using.....

3 8 11

$$\begin{array}{r} _ + _ = _ \\ _ + _ = _ \\ _ - _ = _ \\ _ - _ = _ \end{array}$$

Write the time.



_____ : _____

Subtract.

$$\begin{array}{r} 77 \\ - 34 \\ \hline \end{array} \qquad \begin{array}{r} 52 \\ - 42 \\ \hline \end{array}$$

Week 11 Day 2

Skip count by 100 starting with 112.

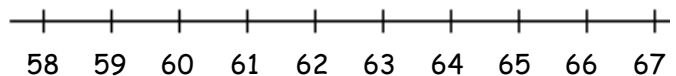
112, _____, _____, _____, _____

Write >, <, or = to compare the numbers.

$300 + 90$ _____ $300 + 70 + 9$

$600 + 70 + 3$ _____ $600 + 30 + 7$

Use the number line to solve.



$65 - 6 = =$ _____

Name: _____

Week 11 Day 3

Complete the number sentence.

$7 + \underline{\quad} = 15$

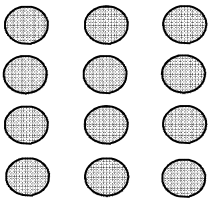
$7 + ? = 15$

$? = \underline{\quad}$

How much money?



use repeated addition to show how many circles there are.



$\underline{\quad} + \underline{\quad} + \underline{\quad} = \underline{\quad}$

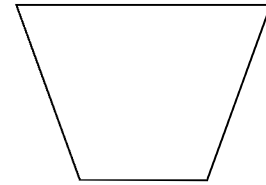
Circle the group of numbers that are from least to greatest.

a) 84, 687, 214, 548

b) 84, 214, 687, 548

c) 84, 214, 548, 687

How many sides and vertices?



_____ sides _____ vertices

Complete the number sentence.

$\underline{\quad} + 6 = 17$

$Z + 6 = 17$

$Z = \underline{\quad}$

Week 11 Day 4

What is 10 more than....?

89 _____

549 _____

426 _____

What is 100 less than....?

432 _____

436 _____

25 _____

Partition (divide) the shape into 6 equal parts.



Write the number in expanded form.

609

Draw a shape with 6 sides.

Name: _____

Week 11 Day 5

Complete the number sentence.

$$\begin{array}{r} 87 \\ - 45 \\ \hline \end{array}$$

$$\begin{array}{r} 79 \\ - 36 \\ \hline \end{array}$$

Write the number.

8 tens, 4 hundreds, 6 ones

Write the value of the underlined digit.

409 _____

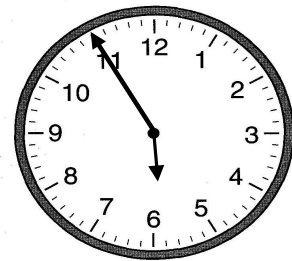
409 _____

409 _____

Write the number in word form.

618

Write the time.



_____ : _____

About how many inches long is the pencil?

Week 11 WP

