

Name: \_\_\_\_\_

## Week 12 Day 1

Complete the number sentence.

$$\begin{array}{r} 547 \\ + 232 \\ \hline \end{array} \quad \begin{array}{r} 335 \\ + 453 \\ \hline \end{array}$$

Is 14 even or odd? Draw pairs above and below the line. Show the number as a doubles or doubles plus one.

\_\_\_\_\_

even / odd      \_\_\_\_\_ + \_\_\_\_\_ = 14

What is 10 less than?

354 \_\_\_\_\_

755 \_\_\_\_\_

949 \_\_\_\_\_

Write a fact family using.....

9      8      17


\_\_\_ + \_\_\_ = \_\_\_

\_\_\_ + \_\_\_ = \_\_\_

\_\_\_ - \_\_\_ = \_\_\_

\_\_\_ - \_\_\_ = \_\_\_

What time will it be one hour after the time shown?



\_\_\_\_\_ : \_\_\_\_\_

Subtract.

$$\begin{array}{r} 54 \\ - 34 \\ \hline \end{array} \quad \begin{array}{r} 89 \\ - 83 \\ \hline \end{array}$$

## Week 12 Day 2

Skip count by 100 starting with 95.

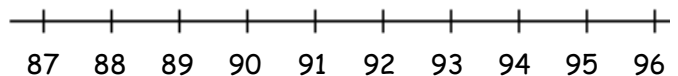
95, \_\_\_\_\_, \_\_\_\_\_, \_\_\_\_\_, \_\_\_\_\_

Write >, <, or = to compare the numbers.

$800 + 70 + 4$  \_\_\_\_\_  $800 + 70 + 9$

$100 + 30 + 3$  \_\_\_\_\_  $300 + 7$

Use the number line to solve.



$96 - 9 =$  \_\_\_\_\_

Name: \_\_\_\_\_

### Week 12 Day 3

Complete the number sentence.

$5 + \underline{\quad} = 9$

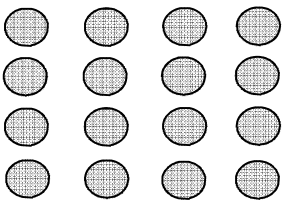
$5 + ? = 9$

$? = \underline{\quad}$

How much money?



use repeated addition to show how many circles there are.



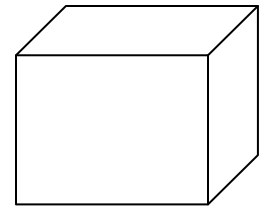
$\underline{\quad} + \underline{\quad} + \underline{\quad} + \underline{\quad} = \underline{\quad}$

Put the numbers in order from least to greatest.

56, 459, 450, 324

\_\_\_\_\_, \_\_\_\_\_, \_\_\_\_\_, \_\_\_\_\_

How many faces and vertices?



\_\_\_\_\_ sides \_\_\_\_\_ vertices

What would you use to measure a pencil? Circle one.

ruler

yardstick

measuring tape

### Week 12 Day 4

What is 10 more than.....?

368 \_\_\_\_\_

87 \_\_\_\_\_

495 \_\_\_\_\_

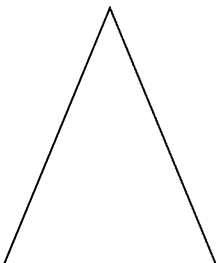
What is 100 more than.....?

248 \_\_\_\_\_

895 \_\_\_\_\_

369 \_\_\_\_\_

Partition (divide) the shape into 2 equal parts.



Write the number in expanded form.

482

\_\_\_\_\_

Draw a shape with 4 vertices.

Name: \_\_\_\_\_

Week 12 Day 5

Complete the number sentence.

$$\begin{array}{r} 54 \\ - 42 \\ \hline \end{array} \qquad \begin{array}{r} 83 \\ - 30 \\ \hline \end{array}$$

Write the number.

five hundred sixty three

\_\_\_\_\_

How many ones, tens, and hundreds.

618

\_\_\_ ones  
\_\_\_ tens  
\_\_\_ hundreds

Write the number in word form.

918

\_\_\_\_\_  
\_\_\_\_\_

Finish the pattern.

10, 15, 20, \_\_\_\_\_, \_\_\_\_\_, \_\_\_\_\_

\_\_\_\_\_, \_\_\_\_\_, \_\_\_\_\_, \_\_\_\_\_

Week 12 WP

Jaya had 22 pennies. She spent 11 pennies at the store. She earned 47 pennies for doing her chores. How many pennies does she have now? Show your work.