

Name: _____

Week 13 Day 1

Complete the number sentence.

$$\begin{array}{r} 248 \\ + 234 \\ \hline \end{array} \quad \begin{array}{r} 327 \\ + 437 \\ \hline \end{array}$$

Is 9 even or odd? Draw pairs above and below the line. Show the number as a doubles or doubles plus one.

even / odd _____ + _____ = 9

What is 20 less than?

482 _____

643 _____

734 _____

Write a fact family using.....

3 7 10


___ + ___ = ___

___ + ___ = ___

___ - ___ = ___

___ - ___ = ___

What time will it be one hour after the time shown?



_____ : _____

Subtract.

$$\begin{array}{r} 54 \\ - 36 \\ \hline \end{array} \quad \begin{array}{r} 75 \\ - 28 \\ \hline \end{array}$$

Week 13 Day 2

Skip count by 100 starting with 327.

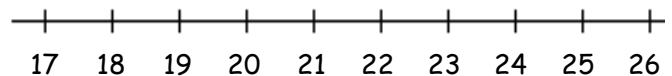
327, _____, _____, _____, _____

Write >, <, or = to compare the numbers.

100 + 4 _____ 300 + 60 + 3

400 + 30 + 6 _____ 600 + 7

Use the number line to solve.



23 - 4 = = _____

Name: _____

Week 13 Day 3

Complete the number sentence.

$7 + \underline{\quad} = 17$


$7 + ? = 17$

$? = \underline{\quad}$

How much money?



Use repeated addition to show how many boxes there are.



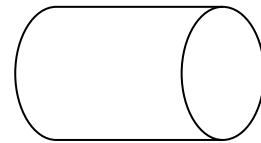
$\underline{\quad} + \underline{\quad} + \underline{\quad} + \underline{\quad} = \underline{\quad}$

Put the numbers in order from least to greatest.

345, 455, 715, 358

____, _____, _____, _____

How many faces and vertices?



_____ sides _____ vertices

Week 13 Day 4

What would you use to measure a couch? Circle one.

ruler

yardstick

measuring tape

What is 10 more than.....?

568 _____

751 _____

847 _____


What is 100 more than.....?

455 _____

752 _____

585 _____

Partition (divide) the shape into 8 equal parts.



Write the number in expanded form.

7593

Draw a shape with 3 vertices.

Name: _____

Week 13 Day 5

Complete the number sentence.

$$\begin{array}{r} 87 \\ - 35 \\ \hline \end{array}$$

$$\begin{array}{r} 52 \\ - 39 \\ \hline \end{array}$$

Write the number.

seven hundred fourteen

How many ones, tens, and hundreds.

482

___ ones
___ tens
___ hundreds

Write the number in word form.

674

Finish the pattern.

90, 95, 100, ____, ____, ____

____, ____, ____, ____

Week 13 WP

Oslynn bought a pizza. She wanted to share it with 3 of her friends. Show how she would have to cut the pizza to have an equal piece for **everyone (including her)**.

