

Name: _____

Week 14 Day 1

Complete the number sentence.

$$\begin{array}{r} 326 \\ + 444 \\ \hline \end{array} \quad \begin{array}{r} 845 \\ + 34 \\ \hline \end{array}$$

Is 12 even or odd? Draw pairs above and below the line. Show the number as a doubles or doubles plus one.

even / odd _____ + _____ = 12

What is 30 less than?

68 _____

486 _____

234 _____

Write a fact family using.....

9 9 18

$$__ + __ = __$$


$$__ + __ = __$$

$$__ - __ = __$$

$$__ - __ = __$$

What time will it be two hours after the time shown?

_____ : _____



Subtract.

$$\begin{array}{r} 89 \\ - 45 \\ \hline \end{array} \quad \begin{array}{r} 62 \\ - 44 \\ \hline \end{array}$$

Week 14 Day 2

Skip count by 100 starting with 327.

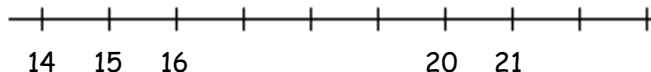
327, _____, _____, _____, _____

Write >, <, or = to compare the numbers.

15 _____ 3 + 9

7 + 7 _____ 14

Finish the number line Use the number line to solve.



$$15 + 4 = = ____$$

Name: _____

Week 14 Day 3

Complete the number sentence.

$9 + \underline{\quad} = 14$


$9 + X = 14$

$X = \underline{\quad}$

How much money?



Use repeated addition to show how many boxes there are.



$\underline{\quad} + \underline{\quad} + \underline{\quad} + \underline{\quad} = \underline{\quad}$

Write the number in standard form from least to greatest.

$600 + 40 + 3$


$200 + 80 + 5$

$90 + 4$

$100 + 70$

_____, _____, _____, _____

Circle the shape with 6 equal faces.



What would you use to measure the hallway in your school? Circle one.

ruler

yardstick

measuring tape

Week 14 Day 4

What is 10 less than.....?

568 _____

751 _____

847 _____

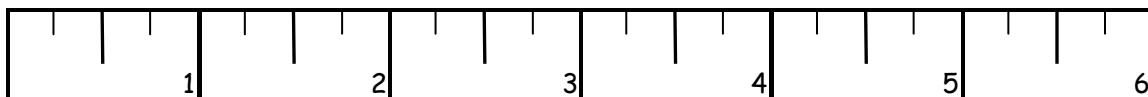
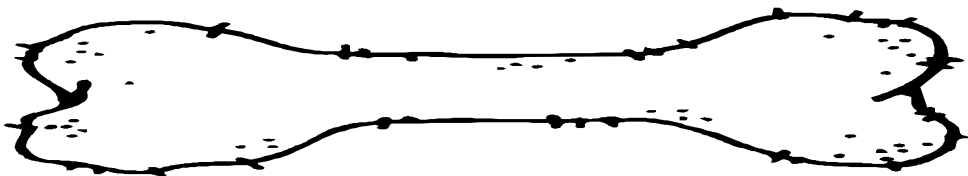
What is 100 less than.....?

455 _____

752 _____

585 _____

About how many inches long is the bone? _____



Name: _____

Week 14 Day 5

Complete the number sentence.

$$\begin{array}{r} 48 \\ + 25 \\ \hline \end{array}$$

$$\begin{array}{r} 73 \\ - 48 \\ \hline \end{array}$$

Write the number.

nine hundred sixty

How many ones, tens, hundreds, and thousands.

6458

___ ones
___ tens
___ hundreds
___ thousands

Write the number in word form.

247

Finish the pattern.

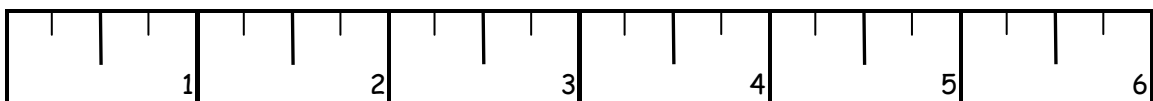

____, ____, 115, 120,

____, ____, ____, ____

Week 14 WP

How many inches longer is pencil B than pencil A? Show your work.

pencil A



pencil B