

Name: _____

Week 15 Day 1

Complete the number sentence.

$$\begin{array}{r} 453 \\ + 272 \\ \hline \end{array} \quad \begin{array}{r} 345 \\ + 82 \\ \hline \end{array}$$

Is 19 even or odd? Draw pairs above and below the line. Show the number as a doubles or doubles plus one.

even / odd _____ + _____ = 19

What is 20 more than?

68 _____

476 _____

234 _____

Write a fact family using....

5 9 14

____ + ____ = ____

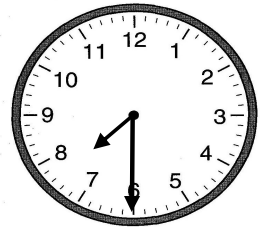
____ + ____ = ____

____ - ____ = ____

____ - ____ = ____

What time will it be one hour after the time shown?

_____ : _____



Subtract.

$$\begin{array}{r} 74 \\ - 48 \\ \hline \end{array} \quad \begin{array}{r} 70 \\ - 24 \\ \hline \end{array}$$

Week 15 Day 2

Chloe has 5 dimes. She earned 7 more dimes for washing the dishes. How much money does Chloe have now? Skip count to find the answer.

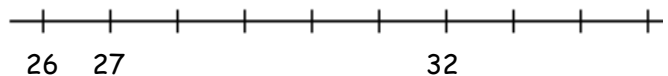
____, _____, _____, _____, _____, _____, _____, _____

Write >, <, or = to compare the numbers.

22 _____ 3 + 9 + 9

3 + 8 + 7 _____ 18

Finish the number line Use the number line to solve.



26 + 7 = = _____

Name: _____

Week 15 Day 3

Complete the number sentence.

$15 - \underline{\quad} = 7$


$15 - X = 7$

$X = \underline{\quad}$

How much money?



Use repeated addition to show how many boxes are shaded.



$\underline{\quad} + \underline{\quad} + \underline{\quad} = \underline{\quad}$

Write the number in standard form from least to greatest.

$900 + 40$

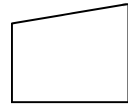
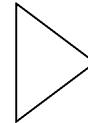
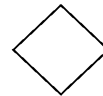
$600 + 70 + 6$

$300 + 5$

$200 + 90$

_____, _____, _____, _____

Circle the shapes with 3 sides.



What would you use to measure the length of your book? Circle one.

ruler

yardstick

measuring tape

Week 15 Day 4

What is 10 more than.....?

486 _____

726 _____

391 _____

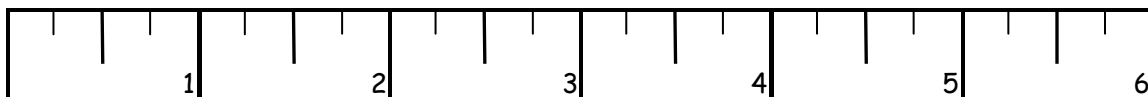

What is 100 more than.....?

736 _____

374 _____

85 _____

About how many inches long is the scroll? _____



Name: _____

Week 15 Day 5

Complete the number sentence.

$$\begin{array}{r} 68 \\ + 27 \\ \hline \end{array} \quad \begin{array}{r} 52 \\ - 28 \\ \hline \end{array} \quad \begin{array}{r} 658 \\ + 280 \\ \hline \end{array}$$

Alli had 8 jelly beans and 6 suckers. She wanted to know how many pieces of candy she had in all. She solved it below. Tell if she is right or wrong and why.

$$8 - 6 = 2$$

How many ones, tens, hundreds, and thousands.

8046
___ ones
___ tens
___ hundreds
___ thousands

Write the number in word form.

759

Finish the pattern.

____, ____, 250, 255,
____, ____, ____, ____

Week 15 WP

Braxton has 1 quarter, 2 dimes, and three nickels in his pocket. How much money does Braxton have? Can he buy a candy bar that costs 75 cents?

How much money? _____

Can he buy the candy bar? _____