

Name: \_\_\_\_\_

## Week 16 Day 1

Complete the number sentence.

$$\begin{array}{c} 34 + 42 = \\ \swarrow \\ 30 + 40 + 4 + 2 = \\ \searrow \\ 70 + 6 = \underline{\quad} \end{array}$$

Is 17 even or odd? Draw pairs above and below the line. Show the number as a doubles or doubles plus one.

\_\_\_\_\_

even / odd       $\underline{\quad} + \underline{\quad} = 17$

What is 20 less than?

68 \_\_\_\_\_

476 \_\_\_\_\_

234 \_\_\_\_\_


Write a fact family using.....

**8      9      17**

$$\begin{array}{l} \underline{\quad} + \underline{\quad} = \underline{\quad} \\ \underline{\quad} + \underline{\quad} = \underline{\quad} \\ \underline{\quad} - \underline{\quad} = \underline{\quad} \\ \underline{\quad} - \underline{\quad} = \underline{\quad} \end{array}$$

What time will it be one hour after the time shown?

:



Subtract.

$$\begin{array}{r} 835 \\ - 68 \\ \hline \end{array} \qquad \begin{array}{r} 672 \\ - 24 \\ \hline \end{array}$$

## Week 16 Day 2

Callie has 35 cents. She earned 6 more nickels for cleaning her room. How much money does Callie have now? Skip count to find the answer.

\_\_\_\_\_

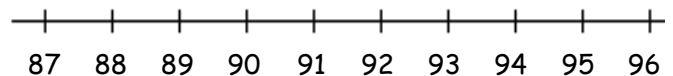
\_\_\_\_\_

Write  $>$ ,  $<$ , or  $=$  to compare the numbers.

$8 + 8 + 3$  \_\_\_\_\_  $16 - 9$

$18 - 2$  \_\_\_\_\_  $3 + 4 + 3$

Use the number line to solve.



$95 - 7 = =$  \_\_\_\_\_

Name: \_\_\_\_\_

### Week 16 Day 3

Complete the number sentence.

$$13 - a = 6$$

$$a =$$

$$b + 3 = 9$$


$$b = \underline{\quad}$$

How much money?



\_\_\_\_\_

Use repeated addition to show how many boxes are shaded.



$$\underline{\quad} + \underline{\quad} + \underline{\quad} = \underline{\quad}$$

Write the number in standard form from least to greatest.

$$200 + 50 + 3$$

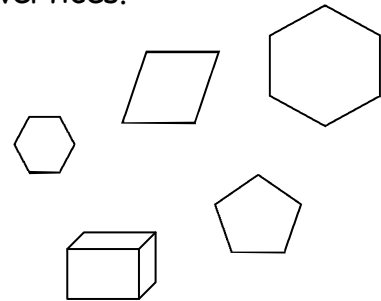
$$700 + 7$$

$$400 + 60 + 9$$

$$900 + 40 + 2$$

\_\_\_\_\_, \_\_\_\_\_, \_\_\_\_\_, \_\_\_\_\_

Circle the shapes with 6 vertices.



Estimate the width of this paper.

29 inches

9 inches

3 feet

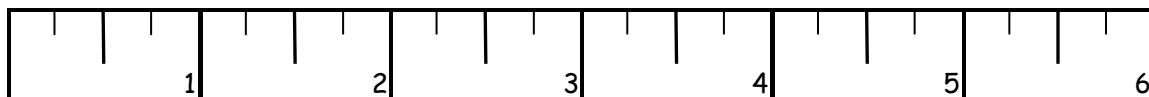

### Week 16 Day 4

Pakey has 437 cents in his piggy bank. Jesse has 20 cents more than Pakey. Owen has 20 cents more than Jesse. How much money does Jesse and Owen have?

Jesse has \_\_\_\_\_ cents.

Owen has \_\_\_\_\_ cents

About how many inches wide is the rectangle? \_\_\_\_\_



Name: \_\_\_\_\_

## Week 16 Day 5

Complete the number problems.

$$\begin{array}{r} 58 \\ + 39 \\ \hline \end{array}$$

$$\begin{array}{r} 80 \\ - 42 \\ \hline \end{array}$$

$$\begin{array}{r} 486 \\ + 647 \\ \hline \end{array}$$

Braelynn has 45 cents. Kelsey has 33 cents. Braelynn wants to know how much more money she has than Kelsey. Did she solve it correctly? Why or why not?

$$\begin{array}{r} 45 \\ + 33 \\ \hline 78 \end{array}$$

---

---

---

---

How many ones, tens, hundreds, and thousands.

6482

\_\_\_ ones  
\_\_\_ tens  
\_\_\_ hundreds  
\_\_\_ thousands

Write the number in word form.

367

---

---

Finish the pattern.

\_\_\_\_, \_\_\_\_, 495, 500,

\_\_\_\_, \_\_\_\_, \_\_\_\_, \_\_\_\_

## Week 16 WP

Brenna had 35 cents in her pocket. She bought a piece of gum for 10 cents. She earned 45 more cents for folding the laundry. How much money does Brenna have now?