

Name: _____

Week 17 Day 3

Complete the number sentence.

$$15 - a = 7$$

$$a =$$


$$b + 4 = 11$$

$$b = \underline{\quad}$$

How much money?



Shade in boxes to match the repeated addition below.


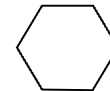


$$4 + 4 + 4 = 12$$

Write the number in standard form.

6478

Circle the shapes with 6 faces.



Which tool would you use to measure the height of the door to your classroom?

ruler

yardstick

measuring tape

Week 17 Day 4

Jaidyn measured the length of her ruler and a crayon. The ruler was 12 inches long. The crayon was 3 inches long. How much longer was the ruler than the crayon? Solve with a number sentence.

Complete the line plot as your teacher instructs.

1

2

3

4

5

6

7

8

9

10

Name: _____

Week 17 Day 5

Complete the problems.

$$\begin{array}{r} 20 \\ 38 \\ + 28 \\ \hline \end{array} \qquad \begin{array}{r} 9 \\ 45 \\ + 48 \\ \hline \end{array}$$

Write the numbers in order from least to greatest.

25, 4356, 356, 947

_____ , _____ , _____ , _____

Write the value of the underlined digit.

4851 _____

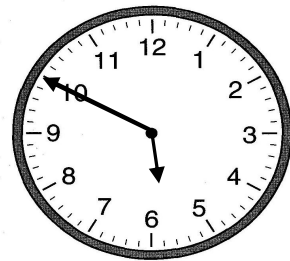
4851 _____

4851 _____

Write the number in word form.

6926

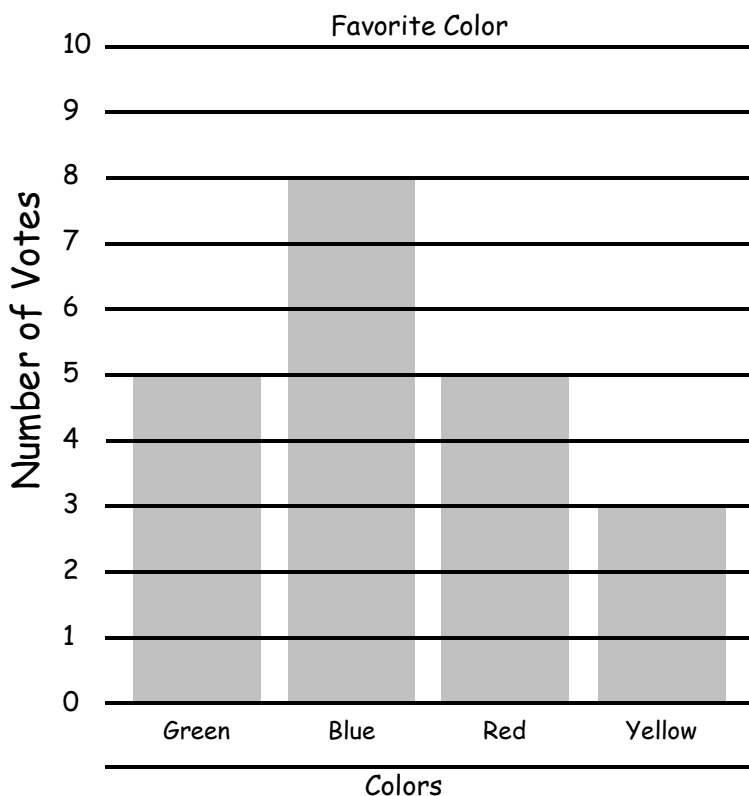
Write the time.



_____ : _____

Use the graph to answer the questions.

Week 17 WP



1. Which color received the most votes?

2. How many votes did yellow receive?

3. How many more votes did blue receive than red? (number sentence)
