

Name: _____

Week 18 Day 1

Complete the number sentence.

$$64 + 31 =$$

$$60 + 30 + 4 + 1 =$$

$$60 + 5 = \underline{\quad}$$

Circle pairs of stars to find out if there is an even or odd amount.

even / odd



What is 100 more than?

$$44 \underline{\quad}$$

$$235 \underline{\quad}$$

$$848 \underline{\quad}$$

Write a fact family using.....

5 7 12

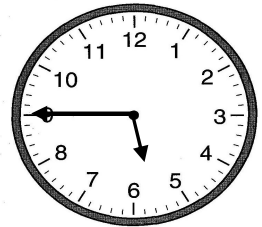
$$\underline{\quad} + \underline{\quad} = \underline{\quad}$$

$$\underline{\quad} + \underline{\quad} = \underline{\quad}$$

$$\underline{\quad} - \underline{\quad} = \underline{\quad}$$

$$\underline{\quad} - \underline{\quad} = \underline{\quad}$$

What time will it be two hours after the time shown?



:

Add or subtract.

$$\begin{array}{r} 897 \\ - 268 \\ \hline \end{array}$$

$$\begin{array}{r} 275 \\ + 55 \\ \hline \end{array}$$

Week 18 Day 2

Chace had 48 cents. His mom gave him 7 dollars. How much money does Chace have now? Skip count to find the answer.

_____ / _____ / _____ / _____ / _____ /

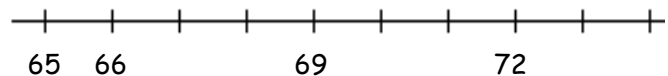
_____ / _____ / _____

Write $>$, $<$, or $=$ to compare the numbers.

$$48 - 10 \underline{\quad} 65 + 10$$

$$76 - 10 \underline{\quad} 56 + 10$$

Finish the number line Use the number line to solve.



$$66 + 6 = \underline{\quad}$$

Name: _____

Week 18 Day 3

Complete the number sentence.

$$8 - a = 5$$

$$a =$$


$$b + 6 = 13$$

$$b = \underline{\quad}$$

How much money?



Shade in boxes to match the repeated addition below.

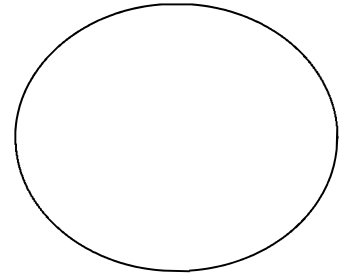


$$5 + 5 + 5 = 15$$

Write the number in standard form.

5789

Divide the shape into fourths.



Which tool would you use to measure the width of your reading book?

ruler

yardstick

measuring tape

Week 18 Day 4

Destiney measured the height of a dresser and her bedroom door. The dresser was 54 inches tall. Her door was 84 inches tall. How much taller is her door than the dresser?

Complete the line plot as your teacher instructs.

1

2

3

4

5

6

7

8

9

10

Name: _____

Week 18 Day 5

Complete the problems.

$$\begin{array}{r} 33 \\ 28 \\ + 44 \\ \hline \end{array}$$
$$\begin{array}{r} 47 \\ 45 \\ + 36 \\ \hline \end{array}$$

Write the numbers in order from least to greatest.

5566, 4598, 658, 478

_____ , _____ , _____ , _____

Write the value of the underlined digit.

6978 _____


7559 _____

5568 _____

Write the number in word form.

7616

Write the time.



_____ : _____

Week 18 WP

Maya had the money below in her pocket. She bought a candy bar for 50 cents. How much money does she have left? Show your work.

