

Name: \_\_\_\_\_

## Week 19 Day 1

Complete the number sentence.

$$36 + 42 =$$

$$30 + \underline{\quad} + 6 + \underline{\quad} =$$

$$\underline{\quad} + \underline{\quad} = \underline{\quad}$$

Circle pairs of stars to find out if there is an even or odd amount.

even / odd



What is 100 more than?

$$485 \underline{\quad}$$

$$35 \underline{\quad}$$

$$367 \underline{\quad}$$

Write a fact family using....

**6      9      15**


$$\underline{\quad} + \underline{\quad} = \underline{\quad}$$

$$\underline{\quad} + \underline{\quad} = \underline{\quad}$$

$$\underline{\quad} - \underline{\quad} = \underline{\quad}$$

$$\underline{\quad} - \underline{\quad} = \underline{\quad}$$

What time will it be two hours after the time shown?



:

Add or subtract.

$$\begin{array}{r} 574 \\ - 275 \\ \hline \end{array}$$

$$\begin{array}{r} 764 \\ + 547 \\ \hline \end{array}$$

## Week 19 Day 2

Chace had \$2.47. His mom gave him 4 dollars. How much money does Chace have now? Skip count to find the answer.

\_\_\_\_\_ / \_\_\_\_\_ / \_\_\_\_\_ / \_\_\_\_\_ / \_\_\_\_\_

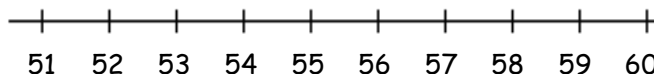
\_\_\_\_\_

Write  $>$ ,  $<$ , or  $=$  to compare the numbers.

$$435 + 100 \underline{\quad} 644 - 100$$

$$78 + 100 \underline{\quad} 267 - 100$$

Finish the number line Use the number line to solve.



$$53 + 6 = \underline{\quad}$$

Name: \_\_\_\_\_

Week 19 Day 3

Complete the number sentence.


$$235 - a = 225 \quad b + 100 = 357$$

$$a = \quad \quad b = \underline{\quad}$$

How much money?



Shade in boxes to match the repeated addition below.



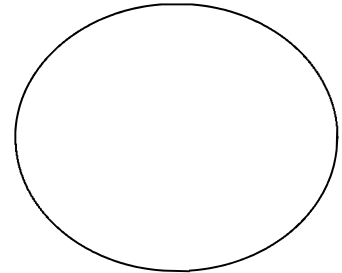
$$2 + 2 + 2 = 6$$

Write the number in standard form.

$$8000 + 400 + 20 + 5$$

\_\_\_\_\_

Divide the shape into halves.



Which tool would you use to measure the width of your desk?

- ruler
- yardstick
- measuring tape

Week 19 Day 4

Finish the pattern.

$$735, 740, 745, \underline{\quad}, \underline{\quad}, \underline{\quad}, \underline{\quad}$$

Complete the line plot as your teacher instructs. (measure multiple objects)

1      2      3      4      5      6      7      8      9      10

Name: \_\_\_\_\_

## Week 19 Day 5

Complete the problems.

$$\begin{array}{r} 25 \\ 45 \\ + 75 \\ \hline \end{array} \qquad \begin{array}{r} 42 \\ 20 \\ + 28 \\ \hline \end{array}$$

Write the numbers in order from least to greatest.

45, 495, 38, 5459

\_\_\_\_\_ , \_\_\_\_\_ , \_\_\_\_\_ , \_\_\_\_\_

Write the value of the underlined digit.

254 \_\_\_\_\_

6448 \_\_\_\_\_

556 \_\_\_\_\_

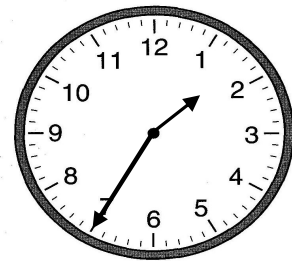
Write the number in word form.

675

\_\_\_\_\_

\_\_\_\_\_

Write the time.



\_\_\_\_\_ : \_\_\_\_\_

## Week 19 WP

Jada had the money below in her purse. She bought a bag of chips for 49 cents. How much money does she have left? Show your work.

