

Name: _____


Week 20 Day 1

Complete the number sentence.

$$27 + 22 =$$
$$20 + \underline{\quad} + 7 + \underline{\quad} =$$
$$\underline{\quad} + \underline{\quad} = \underline{\quad}$$

Count the shaded squares by 2s to determine if the number is even or odd.

even / odd



What is 100 less than?

758 _____

625 _____


245 _____

Use repeated addition to show how the number of stars.



$$\underline{\quad} + \underline{\quad} + \underline{\quad} = \underline{\quad}$$

What time was it one hour before the time shown?



□ : □

Add or subtract.

$$\begin{array}{r} 685 \\ - 629 \\ \hline \end{array}$$
$$\begin{array}{r} 456 \\ + 755 \\ \hline \end{array}$$

Week 20 Day 2

Hunter had \$3.20. He earned 6 nickels for doing his chores. How much money does Hunter have now? Skip count to find the answer.

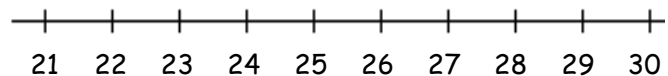
_____ / _____ / _____ / _____
_____ / _____ / _____

Write >, <, or = to compare the numbers.

$$258 + 100 \underline{\quad} 458 - 100$$

$$54 + 200 \underline{\quad} 667 - 200$$

Finish the number line Use the number line to solve.



$$29 - 6 = \underline{\quad}$$

Name: _____

Week 20 Day 3

Complete the number sentence.


$$774 - a = 754 \quad b + 200 = 465$$

$$a = \quad \quad b = \underline{\quad}$$

How much money?



Shade in boxes to match the repeated addition below.



$$5 + 5 + 5 + 5 = 20$$

Write the number in standard form.

$$4000 + 70 + 5$$

Divide the shape into thirds.



Which tool would you use to measure the height of a basketball goal?

- ruler
- yardstick
- measuring tape

Week 20 Day 4

Finish the pattern.

$$210, 215, 220, \underline{\quad}, \underline{\quad}, \underline{\quad}, \underline{\quad}$$

Complete the line plot as your teacher instructs. (measure multiple objects)

1 2 3 4 5 6 7 8 9 10

Name: _____

Week 20 Day 5

Complete the problems.

$$\begin{array}{r} 12 \\ 43 \\ + 24 \\ \hline \end{array} \qquad \begin{array}{r} 25 \\ 67 \\ + 2 \\ \hline \end{array}$$

Write the numbers in order from least to greatest.

5467, 453, 644, 55

_____ , _____ , _____ , _____

Write the value of the underlined digit.

2651 _____

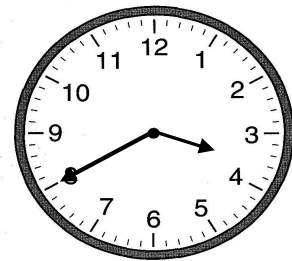
5023 _____

856 _____

Write the number in word form.

708

Write the time.



_____ : _____

Week 20 WP

Kiersten had the money below in her purse. She earned 3 dollars and 2 quarters for raking leaves in her yard. How much money does she have now?

