

Name: \_\_\_\_\_

## Week 21 Day 1

Complete the number sentence.

$$342 + 453 =$$


$$300 + 40 + 2 + 400 + 50 + 3 =$$

$$300 + \underline{\quad} + 40 + \underline{\quad} + 3 + \underline{\quad} =$$

\_\_\_\_\_

Count the shaded squares by 2s to determine if the number is even or odd.

even / odd




What is 200 less than?

$$428 \underline{\quad}$$

$$6598 \underline{\quad}$$

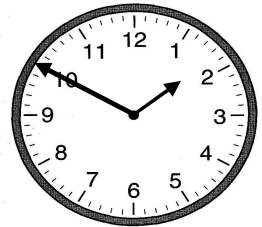
$$752 \underline{\quad}$$

Use repeated addition to show how the number of stars.



$$\underline{\quad} + \underline{\quad} + \underline{\quad} + \underline{\quad} + \underline{\quad} =$$

What time was it one hour before the time shown?



:

Add or subtract.

$$\begin{array}{r} 853 \\ - 654 \\ \hline \end{array}$$

$$\begin{array}{r} 385 \\ + 654 \\ \hline \end{array}$$

## Week 21 Day 2

Garrett had \$6.20. He earned 7 dimes for doing his chores. How much money does Garrett have now? Skip count to find the answer.

\_\_\_\_\_ / \_\_\_\_\_ / \_\_\_\_\_ / \_\_\_\_\_

\_\_\_\_\_ / \_\_\_\_\_ / \_\_\_\_\_ / \_\_\_\_\_

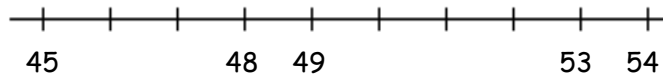
\_\_\_\_\_

Write  $>$ ,  $<$ , or  $=$  to compare the numbers.

$$569 + 100 \underline{\quad} 658 - 100$$

$$488 + 200 \underline{\quad} 888 - 200$$

Finish the number line. Use the number line to solve.



$$52 - 6 = \underline{\quad}$$

Name: \_\_\_\_\_

Week 21 Day 3

Complete the number sentence.


$$663 - a = 653 \quad b + 100 = 596$$

$$a = \quad \quad b = \underline{\quad}$$

How much money?



Shade in boxes to match the repeated addition below.




$$2 + 2 + 2 + 2 = 8$$

Write the number in standard form.

$$4000 + 600 + 50$$

\_\_\_\_\_

Divide the shape into fourths.



Which tool would you use to measure the height of your teacher?

- ruler
- yardstick
- measuring tape

Week 21 Day 4

Finish the pattern.

480, 490, 500, \_\_\_\_\_, \_\_\_\_\_, \_\_\_\_\_, \_\_\_\_\_

Complete the line plot as your teacher instructs. (measure multiple objects)

1      2      3      4      5      6      7      8      9      10

Name: \_\_\_\_\_

## Week 21 Day 5

Complete the problems.

$$\begin{array}{r} 57 \\ 75 \\ + 32 \\ \hline \end{array}$$
$$\begin{array}{r} 542 \\ 67 \\ + 2 \\ \hline \end{array}$$

Write the numbers in order from least to greatest.

655, 75, 4585, 454

\_\_\_\_\_ , \_\_\_\_\_ , \_\_\_\_\_ , \_\_\_\_\_

Write the value of the underlined digit.

4582 \_\_\_\_\_

4566 \_\_\_\_\_

1526 \_\_\_\_\_

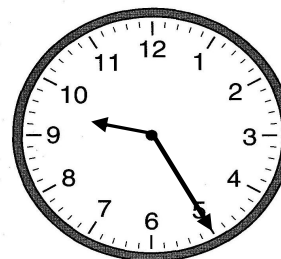
Write the number in word form.

697

\_\_\_\_\_

\_\_\_\_\_

Write the time.



\_\_\_\_\_ : \_\_\_\_\_

## Week 21 WP

Erika had the money below in her pocket. She bought a drink for 62 cents. She earned \$4.62 for aluminum cans she recycled. How much money does Erika have now?

