

Name: _____

Week 22 Day 1

Complete the number sentence.

$$426 + 348 =$$

$$400 + 20 + 6 + 300 + 40 + 8 =$$

$$400 + \underline{\quad} + 20 + \underline{\quad} + 6 + \underline{\quad} =$$


$$700 + 60 + 14 =$$

$$700 + 60 + 10 + 4 =$$

$$700 + 70 + 4 = \underline{\quad}$$

Circle pairs to determine if the number is even or odd.

Write an addition fact to show your answer.



even / odd


What is 100 more than?

$$486 \underline{\hspace{2cm}}$$

$$7582 \underline{\hspace{2cm}}$$


$$726 \underline{\hspace{2cm}}$$

Use repeated addition to show the number of objects in the array.

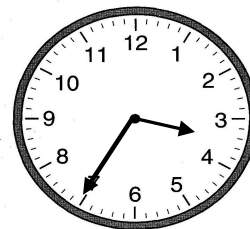


What time is it on the clock below if the sun is up?

Circle a.m. or p.m.



a.m. p.m.



Add or subtract.

$$\begin{array}{r} 962 \\ - 425 \\ \hline \end{array}$$

$$\begin{array}{r} 846 \\ + 426 \\ \hline \end{array}$$

Week 22 Day 2

Dakota is counting by tens. Circle the spot where he messed up and correct it below.

370, 380, 390, 300, 310, 320


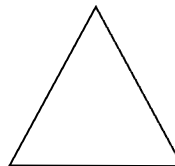
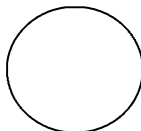
370, _____, _____, _____, _____, _____

Write $>$, $<$, or $=$ to compare the numbers.

$$482 + 100 \underline{\hspace{1cm}} 488 - 10$$

$$365 + 200 \underline{\hspace{1cm}} 759 - 200$$

Draw lines to divide the shapes into halves.



Name: _____

Week 22 Day 3

Complete the number sentence.


$$68 - a = 62 \quad b + 10 = 56$$

$$a = \quad b = \underline{\quad}$$

How much money?



Shade in boxes to match the repeated addition below.

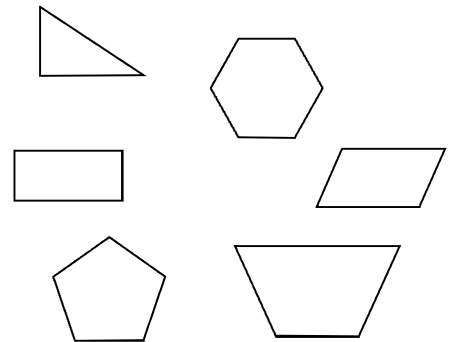


$$5 + 5 + 5 = 15$$

Write the number in standard form.

$$700 + 20 + 3$$

Circle the quadrilaterals.



Estimate the width of a clipboard.

3 inches

10 inches

2 feet

1 yard

Week 22 Day 4

Finish the pattern.

555, 560, 565, _____, _____, _____, _____

_____, _____, _____, _____, _____

Chace measured the length of his desk with paper clips and with crayons. His desk was 15 paper clips long. His desk was 6 crayons long. Why did he get different answers with each measurement unit?

Name: _____

Week 22 Day 5

Complete the problems.

$$\begin{array}{r} 25 \\ 49 \\ + 24 \\ \hline \end{array} \qquad \begin{array}{r} 65 \\ 15 \\ + 45 \\ \hline \end{array}$$

Write the numbers in order from least to greatest.

$500 + 40 + 2$

$200 + 60 + 9$

$800 + 6$

_____ / _____ / _____

Write the value of the underlined digit.

429 _____

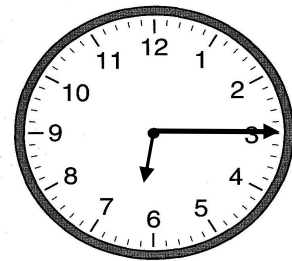
397 _____

485 _____

Write the number in word form.

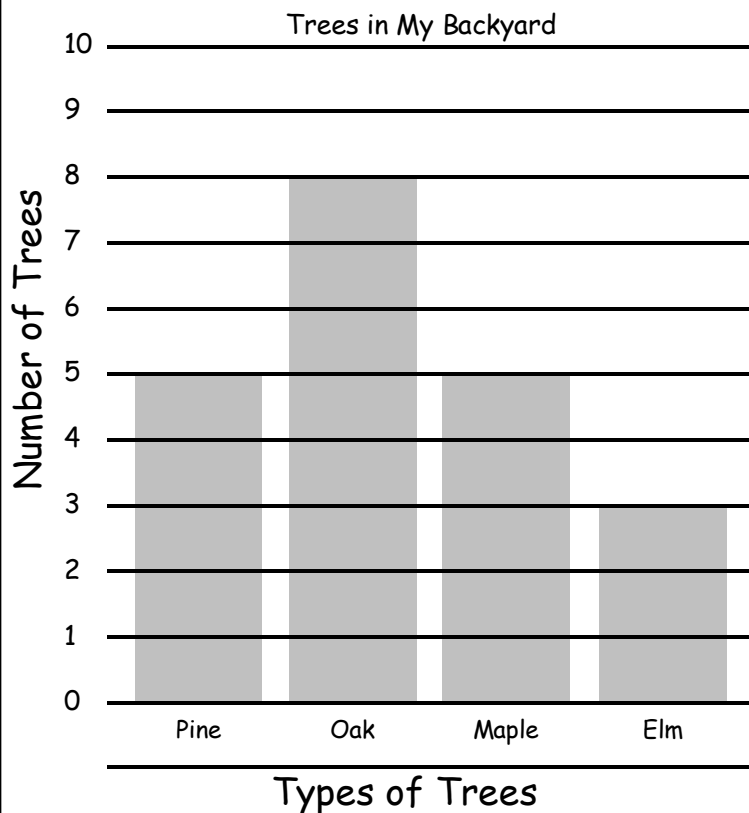
7595

Write the time.



_____ : _____

Week 22 WP



1. How many oak trees are in the yard?

2. How many more pine trees than elm trees are in the yard?

3. How many trees are in the yard altogether?
