

Name: _____

Week 23 Day 1

Complete the number sentence.

$$345 + 248 =$$

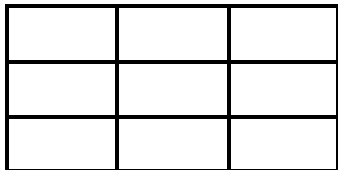
$$300 + 40 + 5 + 200 + 40 + 8 =$$

_____ =


_____ = _____

Tim made a necklace that was 24 inches long. It had 46 beads. Tammy made a necklace that was 34 inches long. How much longer was Tammy's necklace than Tim's?

Alli made a pan of brownies. She cut them into 3 rows and 3 columns of equally sized units. How many brownies (units) did she cut?



Use repeated addition to show the number of objects in the array.

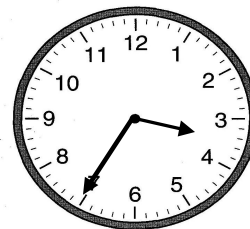


What time is it on the clock below if the sun is down?

Circle a.m. or p.m.

:

a.m. p.m.



Add or subtract.

$$\begin{array}{r} 452 \\ - 278 \\ \hline \end{array}$$

$$\begin{array}{r} 346 \\ + 652 \\ \hline \end{array}$$

Week 23 Day 2

Jesse is counting by fives, but he is stuck. Help him finish the pattern.

585, 590, 595, _____, _____, _____, _____,

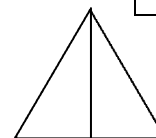
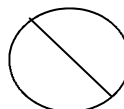
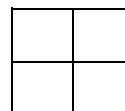
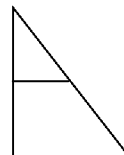

_____, _____, _____, _____, _____, _____

Write $>$, $<$, or $=$ to compare the numbers.

$$500 + 30 + 6 \quad \underline{\hspace{1cm}} \quad 636 - 100$$

$$700 + 60 + 7 \quad \underline{\hspace{1cm}} \quad 964 - 200$$

Circle the shapes that are divided into halves.



Name: _____

Week 23 Day 3

Complete the number sentence.

$$400 + a + 3 = 463 \quad b + 30 + 5 = 235$$


$$a = \underline{\quad}$$

$$b = \underline{\quad}$$

How much money?



Shade in boxes to match the repeated addition below.

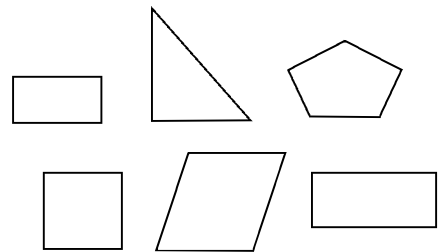


$$3+3+3+3+3=15$$

Write the number in standard form.

$$400 + 60 + 7$$

Circle the 3 rectangles.



What would you use to measure the length of a bus?

Estimate the length of an average school bus.

- | | |
|----------------|-------------------|
| ruler | 14 inches |
| yardstick | 3 feet |
| measuring tape | more than 30 feet |
| | 300 feet |

Week 23 Day 4

Finish the pattern.

\$2.20, \$2.30, \$2.40, _____, _____,
_____, _____, _____, _____

Destiney has \$2.35. She needs \$2.99 to buy a toy at the store. How much more money does she need? Circle the coins she needs to get out of her piggy bank.



Name: _____

Week 23 Day 5

Complete the problems.

$$\begin{array}{r} 24 \\ 35 \\ 35 \\ + 45 \\ \hline \end{array} \qquad \begin{array}{r} 65 \\ 25 \\ 15 \\ + 39 \\ \hline \end{array}$$

Write the numbers in order from least to greatest.

$456 + 10$

$234 + 100$

$754 - 100$

$45 + 100$

_____ , _____ , _____ , _____

Write the value of the underlined digit.

4856 _____


7516 _____

9265 _____

Write the number in word form.

652

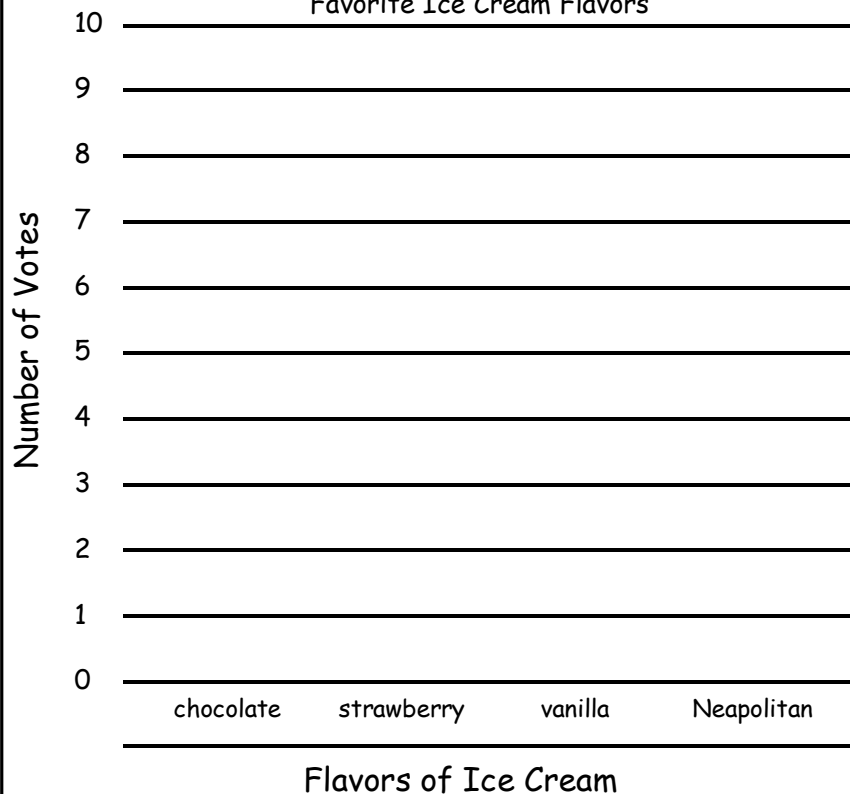
Write the time.



_____ : _____

Week 23 WP

Favorite Ice Cream Flavors



Use the table below to fill in the bar graph to the side.

chocolate	8
strawberry	4
vanilla	2
Neapolitan	4