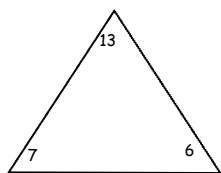


Name: _____

Week 27 Day 1

Maya wants to buy candy that costs \$.37. Circle the coins she uses.

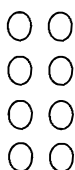
$a + 70 + 9 = 679$ $500 + 60 + b = 563$
 $a = \underline{\hspace{2cm}}$ $b = \underline{\hspace{2cm}}$



Use the fact family to solve the problems.

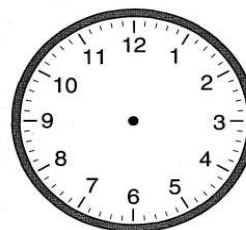

$\underline{\hspace{1cm}} + 7 = 13$
 $\underline{\hspace{1cm}} - 7 = 6$
 $6 + \underline{\hspace{1cm}} = 13$
 $13 - 7 + \underline{\hspace{1cm}}$

Finish the array to match the repeated addition shown below. Write the sum.



$5 + 5 + 5 + 5 = \underline{\hspace{2cm}}$

Show 3:50 on each clock.



Jada has 674 pennies. Write the number in expanded form. _____

She trades the pennies for dollar bills. How many pennies does she have left?

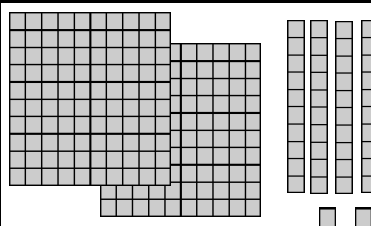
Week 27 Day 2

Marissa solved the subtraction problem below. Check her subtraction with addition. Fix her mistake.

745
~~-539~~
 214

Circle the expressions that are true.

- $600 + 60 + 3 > 700 + 6$
- $500 + 3 > 400 + 30 + 5$
- $200 + 90 + 9 < 300$
- $300 + 40 + 5 = 300 + 50$



Write the amount in standard, word, and expanded form.

Name: _____

Week 27 Day 3

Solve and check with addition


$$\begin{array}{r} 607 \\ -436 \\ \hline \end{array} + \underline{\hspace{2cm}}$$

Skylar is counting out

\$1.12. Cross out the coins she doesn't need.



Partition (divide) the circle in 4 equal parts.



___ fourths

Write the number in standard and word form.

$$9000 + 60 + 3$$

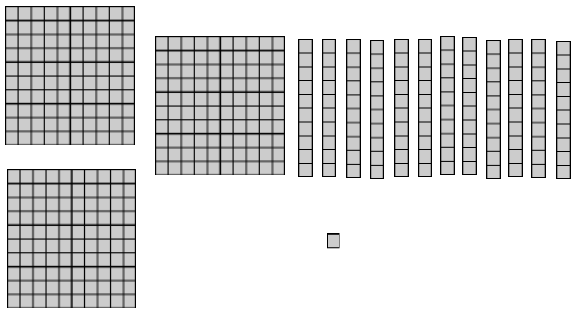
Draw a shape with 3 angles.

How many sides does it have?

_____ sides

Week 27 Day 4

What number is show below? _____



Finish the pattern.

285, 290, _____, _____, _____, _____,
 _____, _____

Circle the 4th number in the pattern.. Write a doubles fact to equal the number you circled.

$$\underline{\hspace{1cm}} + \underline{\hspace{1cm}} = \underline{\hspace{1cm}}$$



Danny has these coins in his pocket. How much money does he have? _____

Danny's sister gives him 3 quarters, 4 dimes, and 3 pennies. How much money did his sister give him? _____

How much money does Danny have now? _____

Name: _____

Week 27 Day 5

What is the sum of 567, 34, and 29?

Write the numbers in order from least to greatest.

$76 - 10$

$257 - 200$

5×6

$24 + 200$

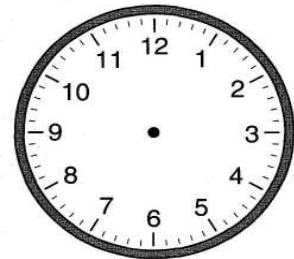
_____ , _____ , _____ , _____

Mylah has 36 shopkins. Brooklyn has 28 shopkins. Hannah has 123 shopkins. How many shopkins do they have altogether?

Write the number in standard and word form.

$7000 + 300 + 80$

Show half past 6 on both clocks.



_____ : _____

What is the value of the tens place in your answer? _____

Complete the chart below. Use the completed chart to solve the problems.

Week 27 WP

Show your work on the chart.

301		303							310
				345					
									370

$369 - 40 = \underline{\quad}$

$303 + 70 = \underline{\quad}$

$384 + 7 = \underline{\quad}$

367 is closer to 360 or 370?
