

Name: \_\_\_\_\_

## Week 3 Day 1

Add

$6 + 5 = \underline{\quad}$

$7 + 6 = \underline{\quad}$

$9 + 8 = \underline{\quad}$

$8 + 7 = \underline{\quad}$

$4 + 3 = \underline{\quad}$

$3 + 4 = \underline{\quad}$

Write the numbers in order from least to greatest.

56, 45, 87, 74

\_\_\_\_\_

Write the value of the underlined digit.

54 \_\_\_\_\_

73 \_\_\_\_\_


12 \_\_\_\_\_

Write  $<$ ,  $>$ , or  $=$

364     844

783     242

Write the time.



\_\_\_\_\_ : \_\_\_\_\_

Subtract

$9 - 5 = \underline{\quad}$

$9 - 4 = \underline{\quad}$

$5 - 2 = \underline{\quad}$

$5 - 3 = \underline{\quad}$

$11 - 6 = \underline{\quad}$

$11 - 5 = \underline{\quad}$

## Week 3 Day 2

Skip count by 10 starting with 30.

30, \_\_\_\_\_, \_\_\_\_\_, \_\_\_\_\_, \_\_\_\_\_, \_\_\_\_\_

How many tens and ones?

72

\_\_\_\_\_ tens


\_\_\_\_\_ ones

Write  $<$ ,  $>$ , or  $=$

787     458

139     844

Write the time.



\_\_\_\_\_ : \_\_\_\_\_

Name: \_\_\_\_\_

### Week 3 Day 3

Add

$5 + 5 = \underline{\quad}$

$8 + 9 = \underline{\quad}$

$7 + 8 = \underline{\quad}$

$6 + 6 = \underline{\quad}$

$3 + 3 = \underline{\quad}$

$7 + 6 = \underline{\quad}$

Write the numbers in order from least to greatest.

47, 69, 12, 89

\_\_\_\_, \_\_\_\_\_, \_\_\_\_\_, \_\_\_\_\_

Write the value of the underlined digit.

87 \_\_\_\_\_

46 \_\_\_\_\_


62 \_\_\_\_\_

Write <, >, or =

467    467

542    325

Write the time.



\_\_\_\_\_ : \_\_\_\_\_

### Week 3 Day 4

Subtract

$16 - 8 = \underline{\quad}$

$13 - 7 = \underline{\quad}$

$9 - 5 = \underline{\quad}$

$18 - 9 = \underline{\quad}$

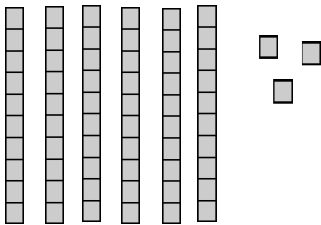
$15 - 8 = \underline{\quad}$

$12 - 6 = \underline{\quad}$

Skip count by 10 starting with 20.

20, \_\_\_\_\_, \_\_\_\_\_, \_\_\_\_\_, \_\_\_\_\_, \_\_\_\_\_

How many tens and ones?



\_\_\_\_\_ tens


\_\_\_\_\_ ones

Write <, >, or =

498    984

176    57

Write the time.



\_\_\_\_\_ : \_\_\_\_\_

Name: \_\_\_\_\_

Week 3 Day 5

Add

$5 + 5 = \underline{\quad}$

$6 + 6 = \underline{\quad}$

$4 + 3 = \underline{\quad}$

$8 + 9 = \underline{\quad}$

$3 + 3 = \underline{\quad}$

$7 + 6 = \underline{\quad}$

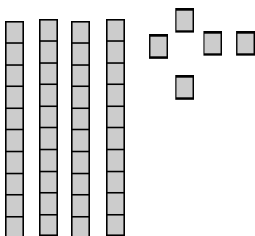
Write the missing number.

78,     , 80

24, 25,     

    , 100, 101

Write the number.




\_\_\_\_\_

Write <, >, or =

89      890

422      455

Write the time.



:

Week 3 WP

Caleb has these coins in his pocket. How much money does he have?



\_\_\_\_\_