

Name: _____

Week 5 Day 1

Complete the number sentence.

$___ + 2 = 10$

$7 + ___ = 10$

$4 + ___ = 10$

$___ + 5 = 10$

Write the number in standard form.

$60 + 4$

Write the value of the underlined digit.

248 _____

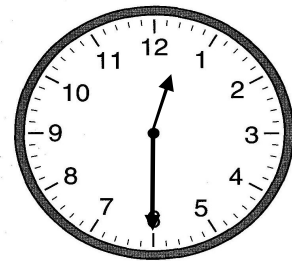
345 _____

685 _____

Circle the greatest number

584 495 349

Write the time.



_____ : _____

Week 5 Day 2

Subtract

$10 - 6 = \underline{\quad}$

$10 - 4 = \underline{\quad}$

$10 - 7 = \underline{\quad}$

$10 - 3 = \underline{\quad}$

$10 - 8 = \underline{\quad}$

$10 - 2 = \underline{\quad}$

Skip count by 10 starting with 25.

25, _____, _____, _____, _____, _____

How many hundreds, tens and ones?

$700 + 40 + 3$

_____ hundreds


_____ tens

_____ ones

Write the number in standard form.

$400 + 30 + 8$

Write the time.



_____ : _____

Name: _____

Week 5 Day 3

Complete the number sentence.

$___ + 4 = 8$

$8 + ___ = 16$

$3 + ___ = 6$

$___ + 6 = 12$

How much money?



Write the value of the underlined digit.

586 _____

429 _____

485 _____

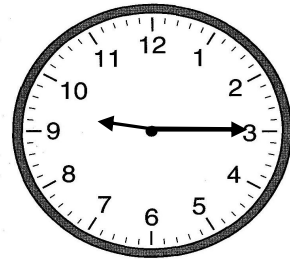
Circle the group of numbers that are from least to greatest.

a) 56, 67, 34, 59

b) 68, 45, 68, 25

c) 45, 68, 87, 90

Write the time.



_____ : _____

Subtract

$17 - 8 = \underline{\quad}$

$7 - 3 = \underline{\quad}$

$9 - 4 = \underline{\quad}$

$11 - 5 = \underline{\quad}$

$18 - 9 = \underline{\quad}$

$15 - 7 = \underline{\quad}$

Skip count by 5 starting with 10.

10, _____, _____, _____, _____, _____

Week 5 Day 4

How many hundreds, tens and ones?

345

_____ hundreds


_____ tens

_____ ones

Write the number in standard form.

$800 + 50 + 7$

Write the time.



_____ : _____

Name: _____

Week 5 Day 5

Complete the number sentence.

$___ + 9 = 18$

$8 + ___ = 17$

$3 + ___ = 10$

$___ + 7 = 15$

Write the numbers in order from least to greatest.

56, 32, 89, 23

____, _____, _____, _____

Write the value of the underlined digit.

658 _____

658 _____

658 _____

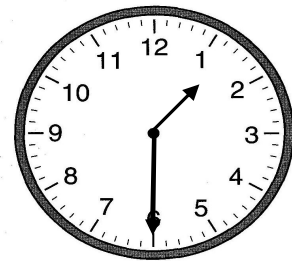
Circle the group of numbers that are from least to greatest.

a) 34, 46, 68, 90

b) 56, 34, 78, 89

c) 34, 56, 73, 15

Write the time.



_____ : _____

Week 5 WP

Donnie has a fieldtrip on the date highlighted on the calendar.

Write the full date and the date using digits on the lines below.

September 2014

S M T W T F S

	1	2	3	4	5	6
7	8	9	10	11	12	13
14	15	16	17	18	19	20
21	22	23	24	25	26	27
28	29	30				