

Name: _____

Week 6 Day 1

Complete the number sentence.

$$\begin{array}{r} 45 \\ +34 \\ \hline \end{array}$$

$$\begin{array}{r} 27 \\ +32 \\ \hline \end{array}$$

Use $>$, $<$, or $=$ to compare the numbers.

$846 \text{ ___ } 245$

$425 \text{ ___ } 85$

$105 \text{ ___ } 150$

$468 \text{ ___ } 468$

What is 10 more than?

45 ______


58 ______

30 ______

Circle the greatest number

584 495 349

Write the time.



_____ : _____

Add

$5 + 4 + 6 = \text{ ______ }$

$3 + 4 + 3 = \text{ ______ }$

Week 6 Day 2

Skip count by 10 starting with 48.

48, _____, _____, _____, _____

How many hundreds, tens and ones?

675

_____ hundreds


_____ tens

_____ ones

Write the number in standard form.

$200 + 60 + 7$

Write the time.



_____ : _____

Name: _____

Week 6 Day 3

Complete the number sentence.

$___ + 3 = 8$

$8 + ___ = 17$

$12 - ___ = 6$

$___ + 8 = 12$

How much money?



What is the biggest number you can make with the numbers below?

4 2 8

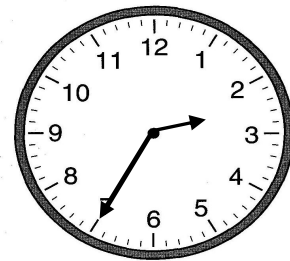
Circle the group of numbers that are from least to greatest.

a) 45, 78, 24, 7

b) 7, 24, 45, 78

c) 7, 24, 78, 45

Write the time.



Complete the number sentence.

$___ + 4 = 11$

$7 + ___ = 17$

$15 - ___ = 6$

$___ - 8 = 3$

Week 6 Day 4

Skip count by 5 starting with 25.

25, _____, _____, _____, _____, _____

How many hundreds, tens and ones?

497

_____ hundreds


_____ tens

_____ ones

Write the number in standard form.

400 + 7

Write the time.



Name: _____

Week 6 Day 5

Complete the number sentence.

$___ + 7 = 18$

$5 + ___ = 13$

$15 - ___ = 10$

$___ - 6 = 7$

Write the numbers in order from least to greatest.

84, 56, 98, 23

____, _____, _____, _____

Write the value of the underlined digit.

945 _____

945 _____

945 _____


Circle the group of numbers that are from least to greatest.

a) 23, 12, 65, 78

b) 78, 65, 23, 12

c) 12, 23, 65, 78

Write the time.



_____ : _____

Week 6 WP

Caleb has 32 pennies. Hunter has 24 pennies. Conner has 21 pennies. How many pennies do they have altogether?