

Name: _____

Week 7 Day 1

Complete the number sentence.

$$\begin{array}{r} 25 \\ +37 \\ \hline \end{array}$$

$$\begin{array}{r} 44 \\ +32 \\ \hline \end{array}$$

Is 17 even or odd?



What is 10 more than?

78 _____

32 _____

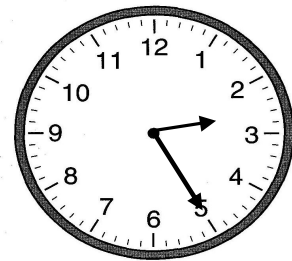
46 _____

Use the commutative property to complete the number sentence.

$5 + 6 = \text{___} + 5$

$3 + 7 = 7 + \text{___}$

Write the time.



_____ : _____

Add

$5 + 5 + 4 + 6 = \text{_____}$

$3 + 4 + 3 + 6 = \text{_____}$

Week 7 Day 2

Skip count by 10 starting with 22.

22, _____, _____, _____, _____

Circle the greatest number.

a) $600 + 50 + 7$

b) $300 + 70 + 8$


c) $600 + 50 + 9$

d) $600 + 80$

Write the number in standard form.

$700 + 50$

Write the time.



_____ : _____

Name: _____

Week 7 Day 3

Complete the number sentence.

$___ + 6 = 13$

$9 + ___ = 15$

$15 - ___ = 6$

$___ - 8 = 9$

How much money?



What is the biggest number you can make with the numbers below?

8 9 4

Circle the group of numbers that are from least to greatest.

a) 16, 26, 52, 35

b) 16, 52, 35, 26

c) 16, 26, 35, 52

How many sides and vertices?



_____ sides _____ vertices

Complete the number sentence.

$___ + 5 = 11$

$9 + ___ = 14$

$14 - ___ = 7$

$___ - 6 = 7$

Week 7 Day 4

Skip count by 5 starting with 40.

40, _____, _____, _____, _____, _____

How many hundreds, tens and ones?

498

_____ hundreds


_____ tens

_____ ones

Write the number in expanded form.

816

Partition (divide) the circle into 2 equal parts.



Name: _____

Week 7 Day 5

Complete the number sentence.

$$\begin{array}{r} 48 \\ +50 \\ \hline \end{array}$$

$$\begin{array}{r} 39 \\ +44 \\ \hline \end{array}$$

Write the numbers in order from least to greatest.

34, 89, 45, 94, 21

Write the value of the underlined digit.

407 _____


407 _____

407 _____

Write the number in word form.

483

Write the time.



_____ : _____

Week 7 WP

Braelynn went to a movie at the time shown on the clock. The movie lasted 3 hours. What time did the movie end?

