

Name: _____

Week 8 Day 1

Complete the number sentence.

$$\begin{array}{r} 27 \\ +47 \\ \hline \end{array} \qquad \begin{array}{r} 40 \\ +54 \\ \hline \end{array}$$

Is 18 even or odd?

○ ○ ○ ○ ○ ○ ○ ○ ○ ○

○ ○ ○ ○ ○ ○ ○ ○ ○ ○

What is 10 less than?

78 _____

32 _____

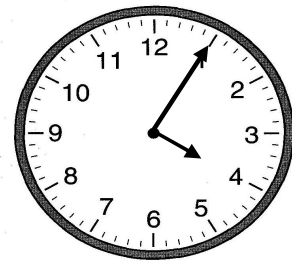
46 _____

Use the commutative property to complete the number sentence.

$$7 + 9 = _ + 7$$

$$4 + 8 = 8 + _$$

Write the time.



_____ : _____

Add

$$6 + 3 + 6 + 2 = \underline{\hspace{2cm}}$$

$$4 + 7 + 3 + 5 = \underline{\hspace{2cm}}$$

Week 8 Day 2

Skip count by 10 starting with 74.

74, _____, _____, _____, _____


Circle the greatest number.

- a) 500 + 70
- b) 500 + 9
- c) 500 + 20 + 6
- d) 90 + 5

Write the number in standard form.

$$600 + 3$$

Write the time.



_____ : _____

Name: _____

Week 8 Day 3

Complete the number sentence.

$___ + 7 = 15$

$3 + ___ = 12$

$18 - ___ = 6$

$___ - 5 = 7$

How much money?



What is the biggest number you can make with the numbers below?

3 7 2

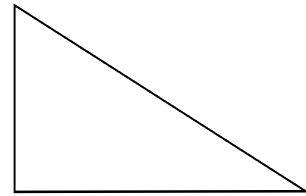
Circle the group of numbers that are from least to greatest.

a) 125, 452, 351, 748

b) 125, 351, 452, 748

c) 351, 748, 452, 125

How many sides and vertices?



_____ sides _____ vertices

Complete the number sentence.

$___ + 7 = 11$

$6 + ___ = 14$

$17 - ___ = 8$

$___ - 5 = 8$

Week 8 Day 4

Skip count by 5 starting with 90.

90, _____, _____, _____, _____, _____

How many hundreds, tens and ones?

278

_____ hundreds


_____ tens

_____ ones

Write the number in expanded form.

608

Partition (divide) the circle into 4 equal parts.



Name: _____

Week 8 Day 5

Complete the number sentence.

$$\begin{array}{r} 33 \\ +27 \\ \hline \end{array}$$

$$\begin{array}{r} 28 \\ +54 \\ \hline \end{array}$$

Write the numbers in order from least to greatest.

248, 486, 126, 94

_____ , _____ , _____ , _____

Write the value of the underlined digit.

782 _____

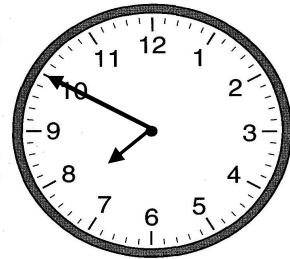
782 _____

782 _____

Write the number in word form.

111

Write the time.



_____ : _____

Week 8 WP

Pakey is 52 inches tall. His teddy bear is 14 inches tall. How much taller is Pakey than his teddy bear?
