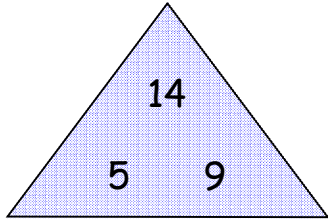


Name: \_\_\_\_\_

CCSS 2.OA.2.2 Fluently add and subtract within 20 using mental strategies.....

# Fact Families

**6** Directions: Complete the fact families with the given numbers.

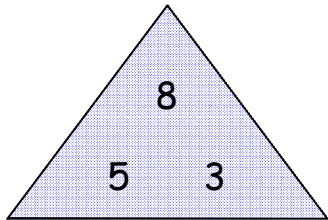


$___ + ___ = ___$

$___ - ___ = ___$

$___ + ___ = ___$

$___ - ___ = ___$

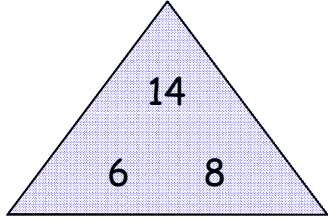


$___ + ___ = ___$

$___ - ___ = ___$

$___ + ___ = ___$

$___ - ___ = ___$

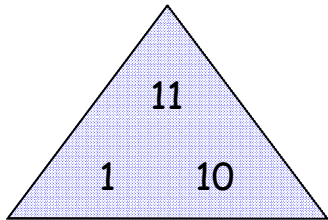


$___ + ___ = ___$

$___ - ___ = ___$

$___ + ___ = ___$

$___ - ___ = ___$

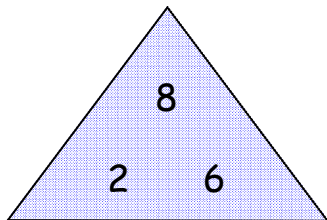


$___ + ___ = ___$

$___ - ___ = ___$

$___ + ___ = ___$

$___ - ___ = ___$



$___ + ___ = ___$

$___ - ___ = ___$

$___ + ___ = ___$

$___ - ___ = ___$

\_\_\_ I double checked my work.