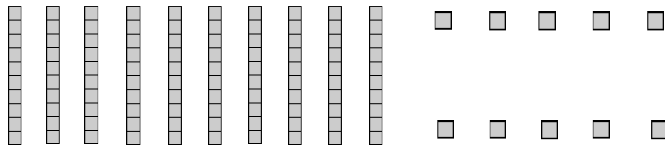



Name: _____

Place Value Blocks

6 Directions: Circle the place value blocks needed to make the number.

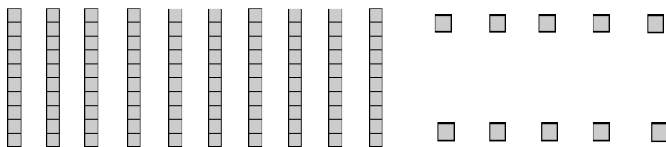

1. 517



How many hundred blocks did you circle? _____ Tens? _____ Ones? _____

Write the number shown by the blocks you circled. _____

2. 482



How many hundred blocks did you circle? _____ Tens? _____ Ones? _____

Write the number shown by the blocks you circled. _____

____ I double checked my work.

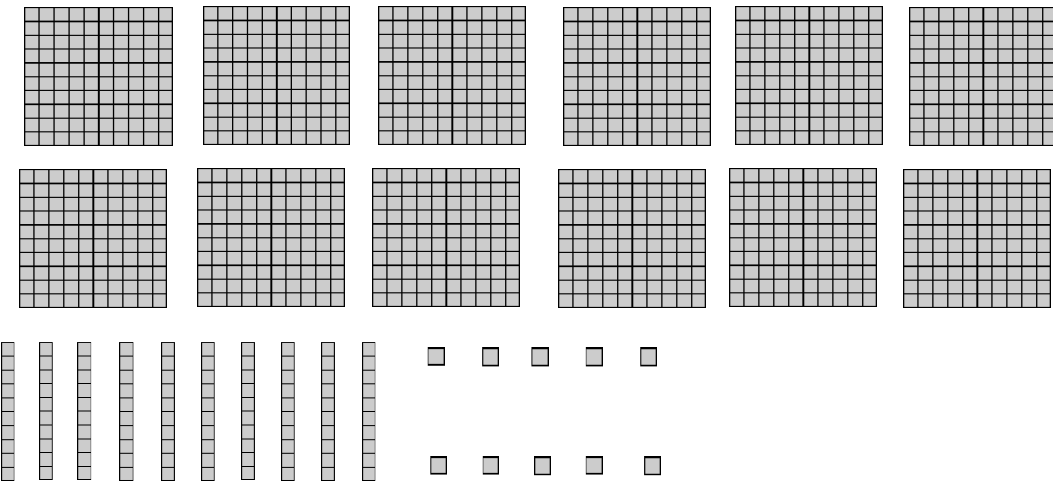
Name: _____

CCSS 2.NBT.1 Understand that the three digits of a three-digit number represent amounts of hundreds, tens, and ones...

Place Value Blocks

6 Directions: Circle the place value blocks needed to make the number.

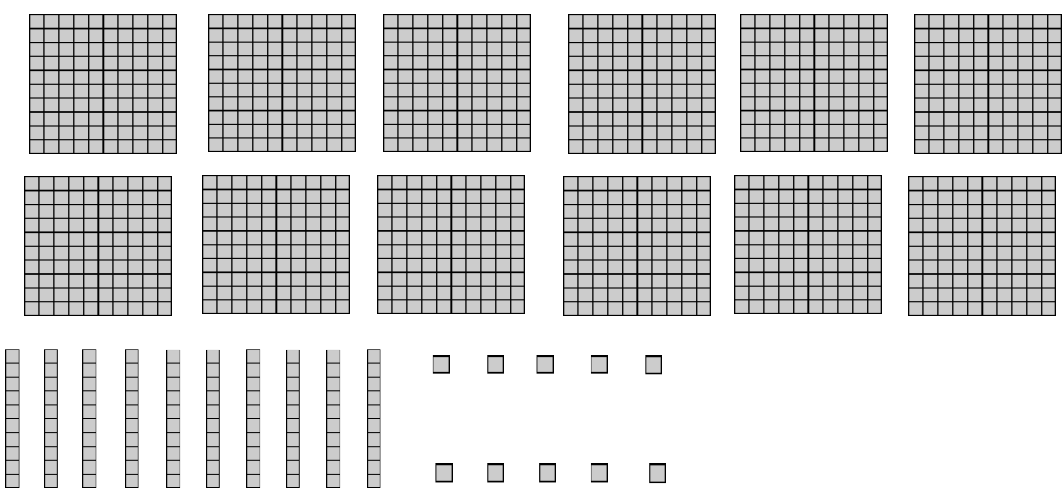
3. 193



How many hundred blocks did you circle? _____ Tens? _____ Ones? _____

Write the number shown by the blocks you circled. _____

4. 311



How many hundred blocks did you circle? _____ Tens? _____ Ones? _____

Write the number shown by the blocks you circled. _____

____ I double checked my work.