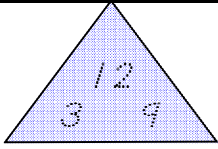
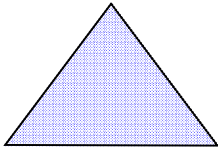
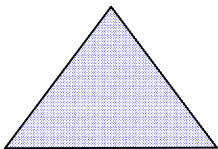
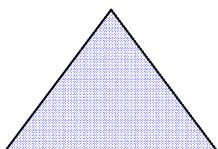
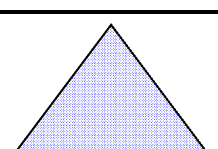


Name: _____

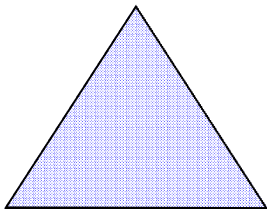
CCSS 2.OA.2.2 Fluently add and subtract within 20 using mental strategies.....

Fact Families

6 Directions: Complete the fact families.

| | | | |
|---|------------------------------|------------------------------|------------------------------|
|  | $3 + \underline{\quad} = 12$ | $12 - 9 = \underline{\quad}$ | $\underline{\quad} - 9 = 3$ |
|  | $6 + 8 = \underline{\quad}$ | $14 - 8 = \underline{\quad}$ | $8 + 6 = \underline{\quad}$ |
|  | $6 + \underline{\quad} = 11$ | $\underline{\quad} - 5 = 6$ | $11 - 6 = \underline{\quad}$ |
|  | $9 - \underline{\quad} = 6$ | $3 + \underline{\quad} = 9$ | $6 + 3 = \underline{\quad}$ |
|  | $17 - 8 = \underline{\quad}$ | $8 + 9 = \underline{\quad}$ | $\underline{\quad} - 9 = 8$ |

Make your own fact family problems. Write the numbers in the triangle.

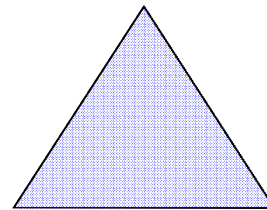


$$\underline{\quad} + \underline{\quad} = \underline{\quad}$$

$$\underline{\quad} + \underline{\quad} = \underline{\quad}$$

$$\underline{\quad} - \underline{\quad} = \underline{\quad}$$

$$\underline{\quad} + \underline{\quad} = \underline{\quad}$$



$$\underline{\quad} + \underline{\quad} = \underline{\quad}$$

$$\underline{\quad} + \underline{\quad} = \underline{\quad}$$

$$\underline{\quad} - \underline{\quad} = \underline{\quad}$$

$$\underline{\quad} + \underline{\quad} = \underline{\quad}$$

___ I double checked my work.