

Name: _____

Addition and Subtraction

6/ Directions: Solve the problems.

$$\begin{array}{r} 53 \\ + 69 \\ \hline \end{array}$$

$$\begin{array}{r} 52 \\ - 26 \\ \hline \end{array}$$

$$\begin{array}{r} 18 \\ 46 \\ + 27 \\ \hline \end{array}$$


$$\begin{array}{r} 59 \\ - 28 \\ \hline \end{array}$$

$$\begin{array}{r} 698 \\ + 565 \\ \hline \end{array}$$

$$\begin{array}{r} 468 \\ - 268 \\ \hline \end{array}$$


$$456 + 45 = \underline{\quad}$$

$$158 - 39 = \underline{\quad}$$



Name: _____

Addition and Subtraction

 Directions: Solve the problems.

$$\begin{array}{r} 17 \\ + 96 \\ \hline \end{array}$$

$$\begin{array}{r} 18 \\ - 9 \\ \hline \end{array}$$

$$\begin{array}{r} 45 \\ 69 \\ + 27 \\ \hline \end{array}$$


$$\begin{array}{r} 76 \\ - 68 \\ \hline \end{array}$$

$$\begin{array}{r} 458 \\ + 769 \\ \hline \end{array}$$

$$\begin{array}{r} 916 \\ - 566 \\ \hline \end{array}$$

$$536 + 78 = \underline{\quad}$$

$$814 - 53 = \underline{\quad}$$



Name: _____

Addition and Subtraction

Directions: Solve the problems.

$$\begin{array}{r} 45 \\ 35 \\ 48 \\ + 20 \\ \hline \end{array}$$



$$\begin{array}{r} 86 \\ - 24 \\ \hline \end{array}$$

$$\begin{array}{r} 54 \\ 36 \\ + 42 \\ \hline \end{array}$$

$$\begin{array}{r} 45 \\ - 34 \\ \hline \end{array}$$

$$\begin{array}{r} 468 \\ + 756 \\ \hline \end{array}$$

$$\begin{array}{r} 789 \\ - 564 \\ \hline \end{array}$$



Name: _____

Addition and Subtraction

~~6~~ Directions: Solve the problems.

$$\begin{array}{r} 45 \\ 75 \\ 68 \\ + 8 \\ \hline \end{array}$$



$$\begin{array}{r} 75 \\ - 56 \\ \hline \end{array}$$

$$\begin{array}{r} 79 \\ 56 \\ + 45 \\ \hline \end{array}$$

$$\begin{array}{r} 46 \\ - 46 \\ \hline \end{array}$$

$$\begin{array}{r} 469 \\ + 654 \\ \hline \end{array}$$

$$\begin{array}{r} 842 \\ - 508 \\ \hline \end{array}$$



Name: _____

Addition and Subtraction

~~6~~ Directions: Solve the problems.

$$\begin{array}{r} 64 \\ 34 \\ 30 \\ + 83 \\ \hline \end{array}$$


$$\begin{array}{r} 64 \\ - 27 \\ \hline \end{array}$$

$$\begin{array}{r} 34 \\ 48 \\ + 45 \\ \hline \end{array}$$

$$\begin{array}{r} 82 \\ - 45 \\ \hline \end{array}$$

$$\begin{array}{r} 674 \\ + 394 \\ \hline \end{array}$$

$$\begin{array}{r} 624 \\ - 541 \\ \hline \end{array}$$



Name: _____

Addition and Subtraction

~~6~~ Directions: Solve the problems.

$$\begin{array}{r} 48 \\ 40 \\ 36 \\ + 75 \\ \hline \end{array}$$

$$\begin{array}{r} 46 \\ - 38 \\ \hline \end{array}$$

$$\begin{array}{r} 14 \\ 36 \\ + 25 \\ \hline \end{array}$$

$$\begin{array}{r} 95 \\ - 56 \\ \hline \end{array}$$

$$\begin{array}{r} 865 \\ + 414 \\ \hline \end{array}$$

$$\begin{array}{r} 756 \\ - 414 \\ \hline \end{array}$$

