


Name: _____

Addition and Subtraction

 Directions: Solve the problems.

$$\begin{array}{r} 76 \\ + 44 \\ \hline \end{array}$$

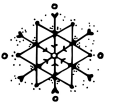
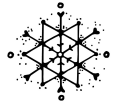
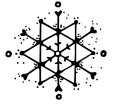
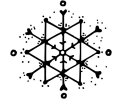
$$\begin{array}{r} 93 \\ - 48 \\ \hline \end{array}$$

$$\begin{array}{r} 34 \\ 26 \\ + 47 \\ \hline \end{array}$$

$$\begin{array}{r} 64 \\ - 28 \\ \hline \end{array}$$

$$\begin{array}{r} 564 \\ + 576 \\ \hline \end{array}$$

$$\begin{array}{r} 675 \\ - 568 \\ \hline \end{array}$$



$65 + 45 = \underline{\quad}$


$85 - 39 = \underline{\quad}$

$25 + 54 = \underline{\quad}$



Name: _____

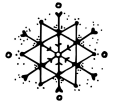
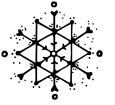
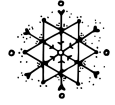
Addition and Subtraction

 Directions: Solve the problems.

$$\begin{array}{r} 45 \\ + 79 \\ \hline \end{array}$$

$$\begin{array}{r} 76 \\ - 28 \\ \hline \end{array}$$

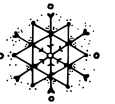
$$\begin{array}{r} 26 \\ 75 \\ + 87 \\ \hline \end{array}$$



$$\begin{array}{r} 86 \\ - 24 \\ \hline \end{array}$$

$$\begin{array}{r} 465 \\ + 478 \\ \hline \end{array}$$

$$\begin{array}{r} 675 \\ - 568 \\ \hline \end{array}$$



$47 + 98 = \underline{\quad}$

$54 - 49 = \underline{\quad}$

$47 + 87 = \underline{\quad}$



Name: _____

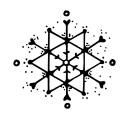
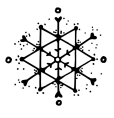
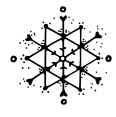
Addition and Subtraction

 Directions: Solve the problems.

$$\begin{array}{r} 56 \\ 35 \\ 23 \\ + 65 \\ \hline \end{array}$$

$$\begin{array}{r} 76 \\ - 28 \\ \hline \end{array}$$

$$\begin{array}{r} 26 \\ 75 \\ + 87 \\ \hline \end{array}$$



$$\begin{array}{r} 90 \\ - 34 \\ \hline \end{array}$$

$$\begin{array}{r} 365 \\ + 376 \\ \hline \end{array}$$

$$\begin{array}{r} 758 \\ - 356 \\ \hline \end{array}$$

